

# 2D transformations (a.k.a. warping)



# Overview of today's lecture

- Reminder: image transformations.
- 2D transformations.
- Projective geometry 101.
- Transformations in projective geometry.
- Classification of 2D transformations.
- Determining unknown 2D transformations.
- Determining unknown image warps.

# Slide credits

Most of these slides were adapted from:

- Kris Kitani (16-385, Spring 2017).

Reminder: image transformations

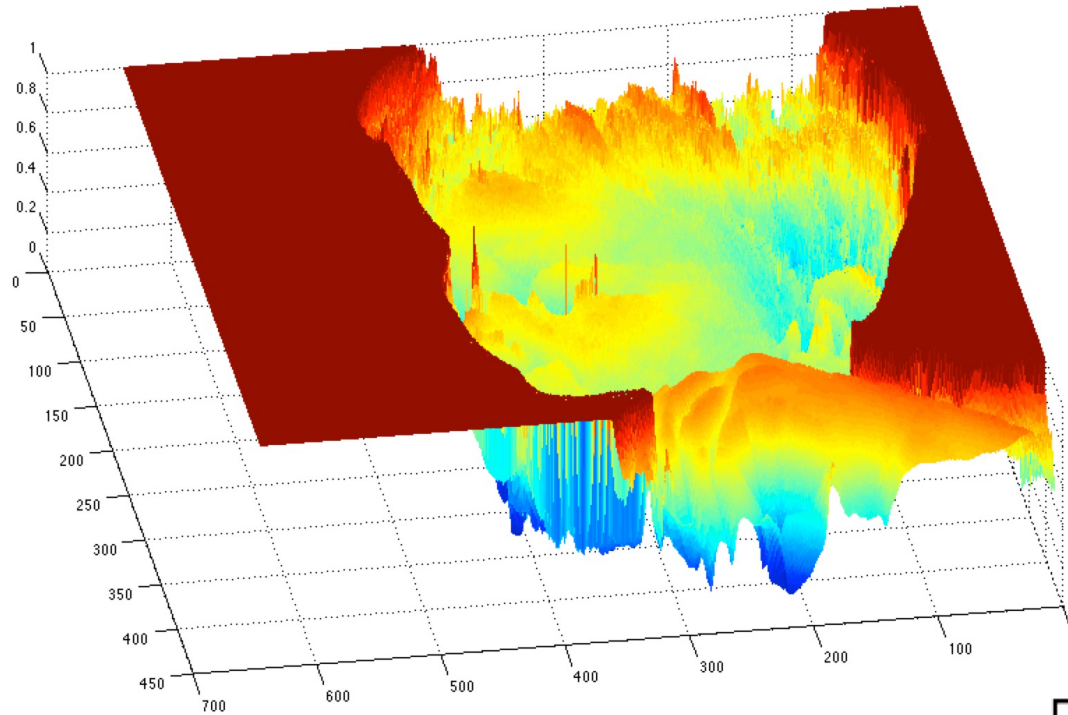
# What is an image?



grayscale image

What is the range of the image function  $f$ ?

$f(\mathbf{x})$



domain  $\mathbf{x} = \begin{bmatrix} x \\ y \end{bmatrix}$

A (grayscale) image is a 2D function.

# What types of image transformations can we do?




Filtering



changes pixel *values*



Warping



changes pixel *locations*



# What types of image transformations can we do?

$F$



Filtering



$$G(\mathbf{x}) = h\{F(\mathbf{x})\}$$

$G$



changes *range* of image function

$F$




Warping



$$G(\mathbf{x}) = F(h\{\mathbf{x}\})$$

$G$



changes *domain* of image function

# Warping example: feature matching






# Warping example: feature matching



# Warping example: feature matching



- object recognition
- 3D reconstruction
- augmented reality
- image stitching

How do you compute the transformation?

# Warping example: feature matching

Given a set of matched feature points:

$$\{x_i, x'_i\}$$

point in one  
image

point in the  
other image

and a transformation:


$$x' = f(x; p)$$

transformation  
function

parameters

find the best estimate of the parameters

$p$



What kind of transformation functions  $f$  are there?

# 2D transformations



# 2D transformations



translation



rotation



aspect



affine



perspective



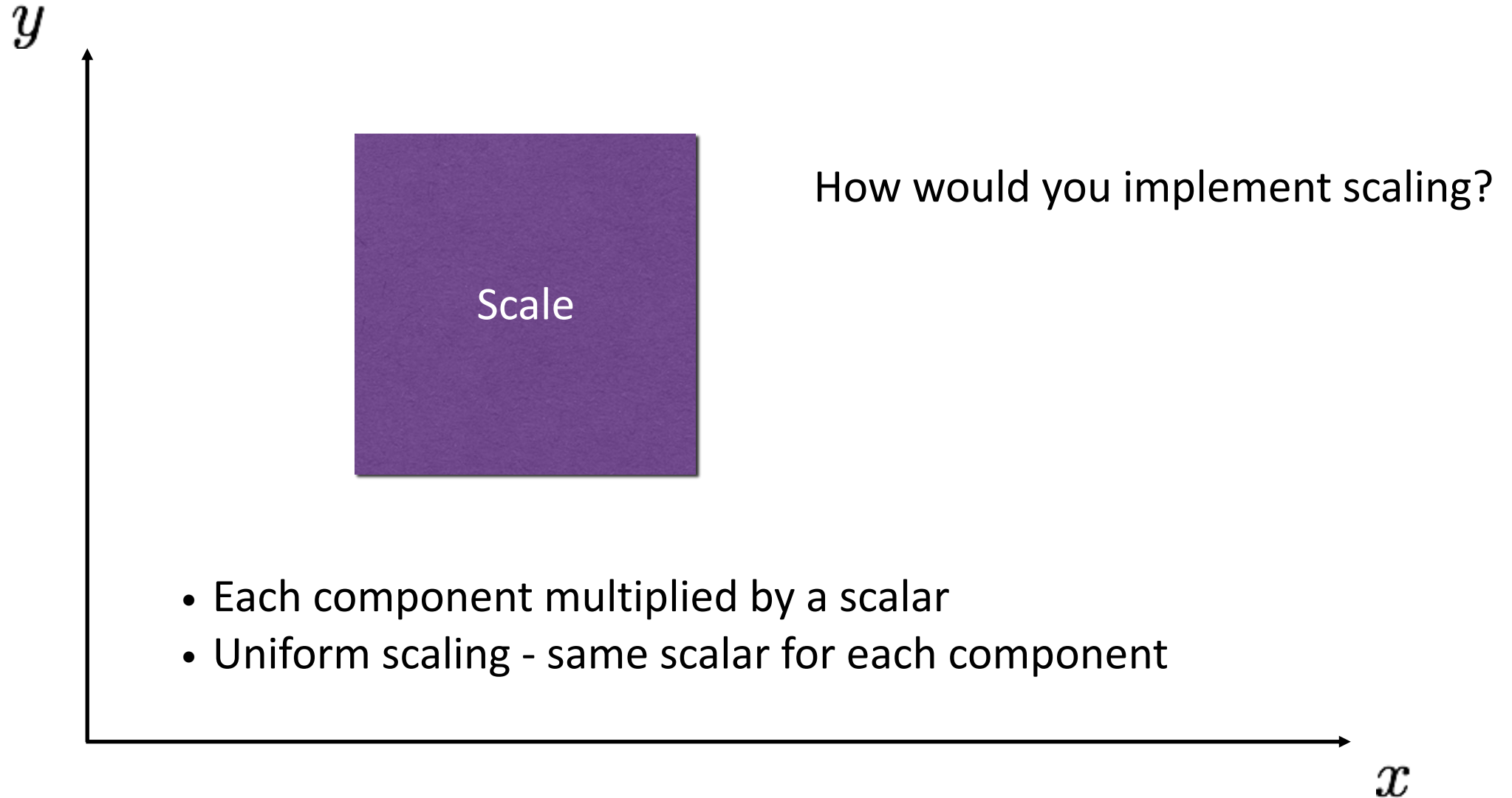
cylindrical

# 2D planar transformations

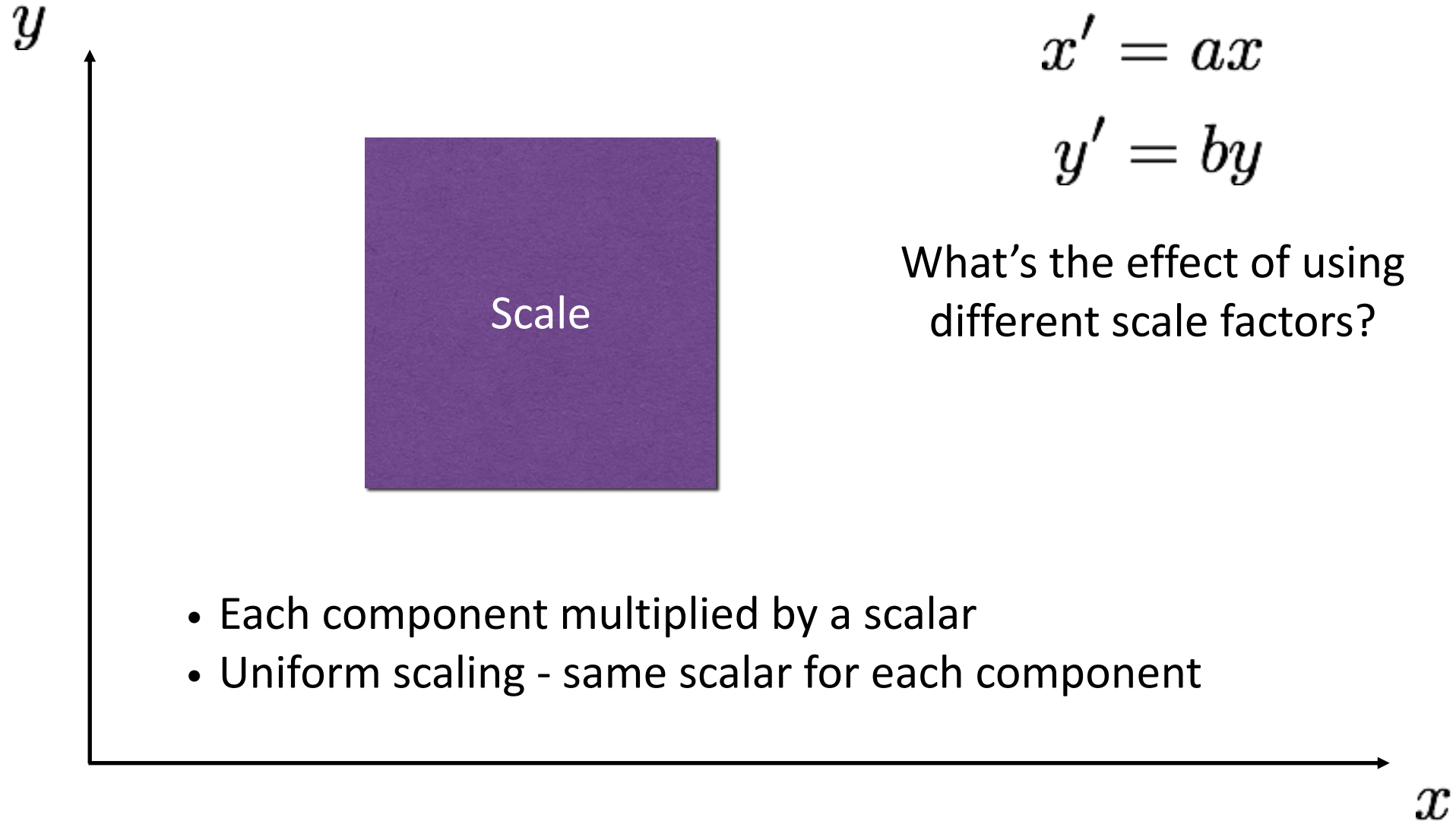




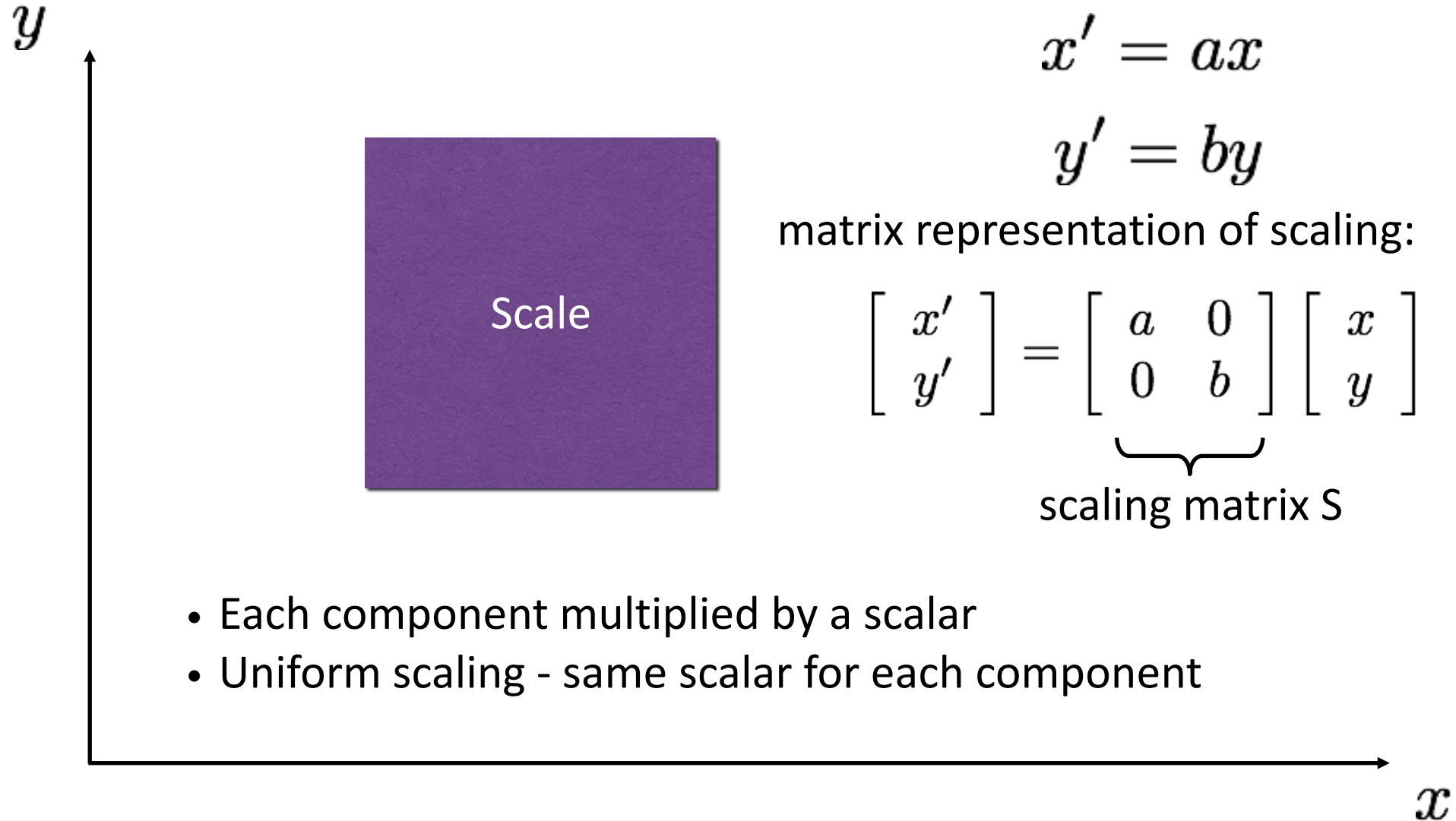
# 2D planar transformations



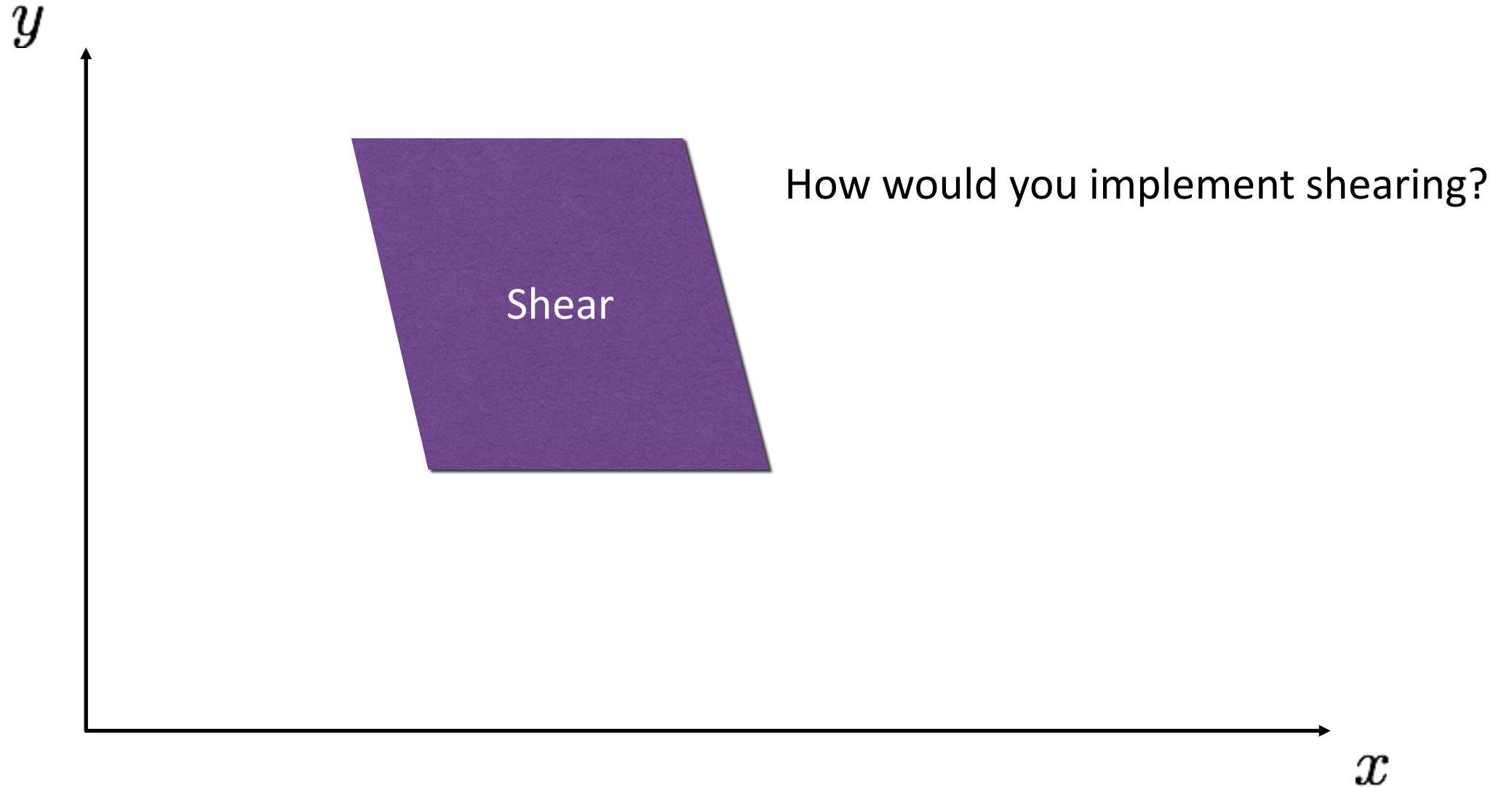
# 2D planar transformations



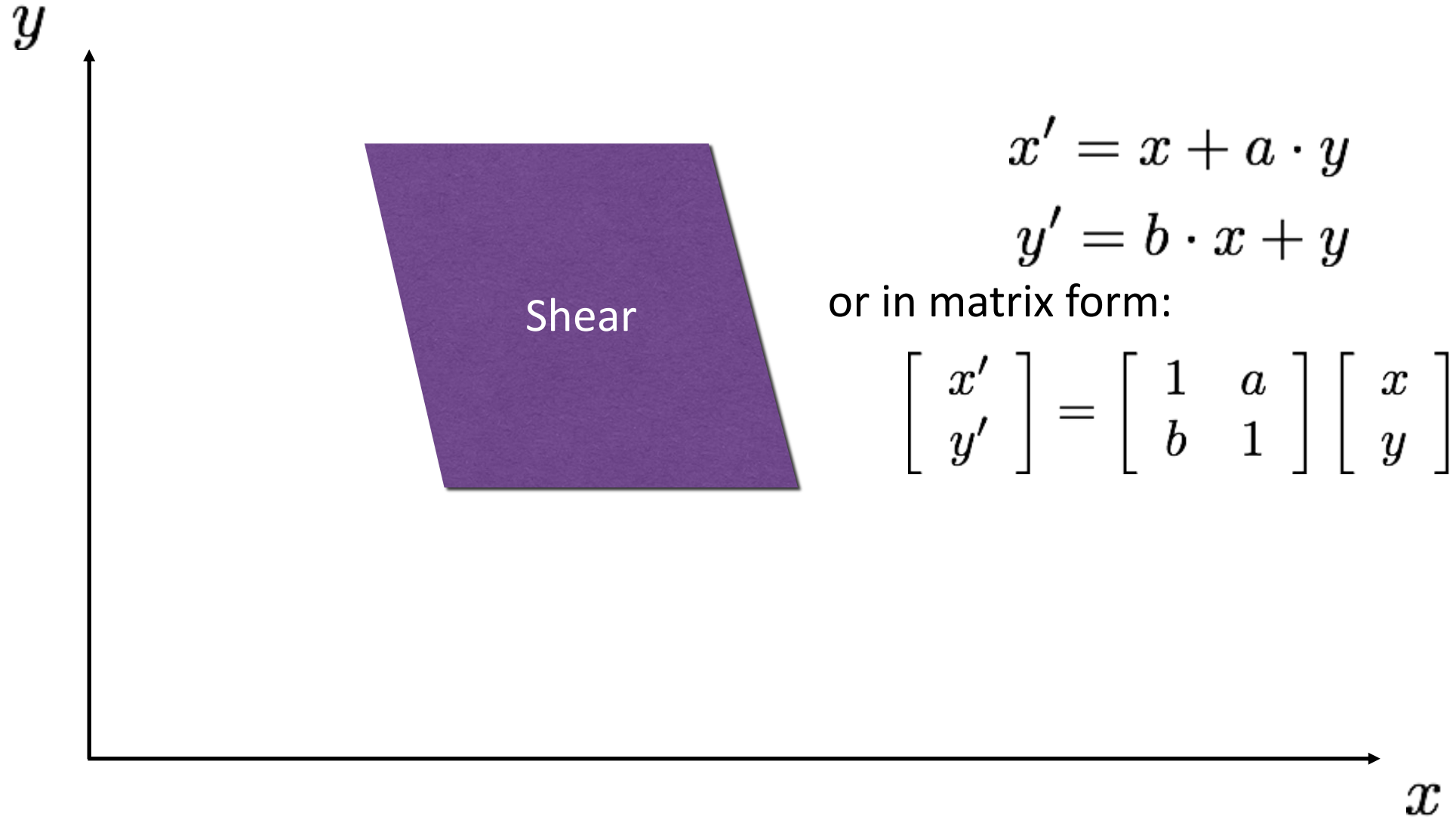
# 2D planar transformations



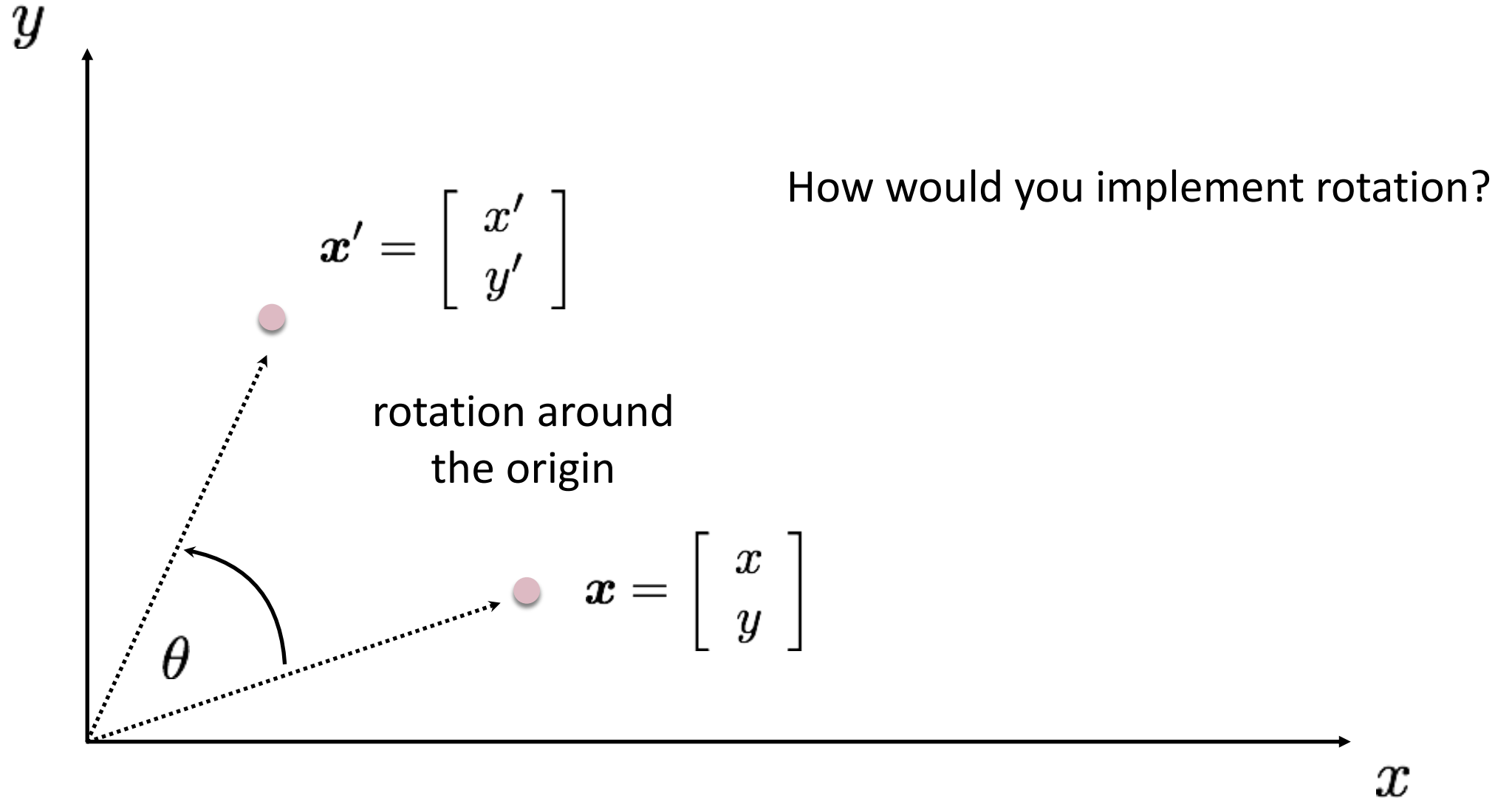
# 2D planar transformations



# 2D planar transformations

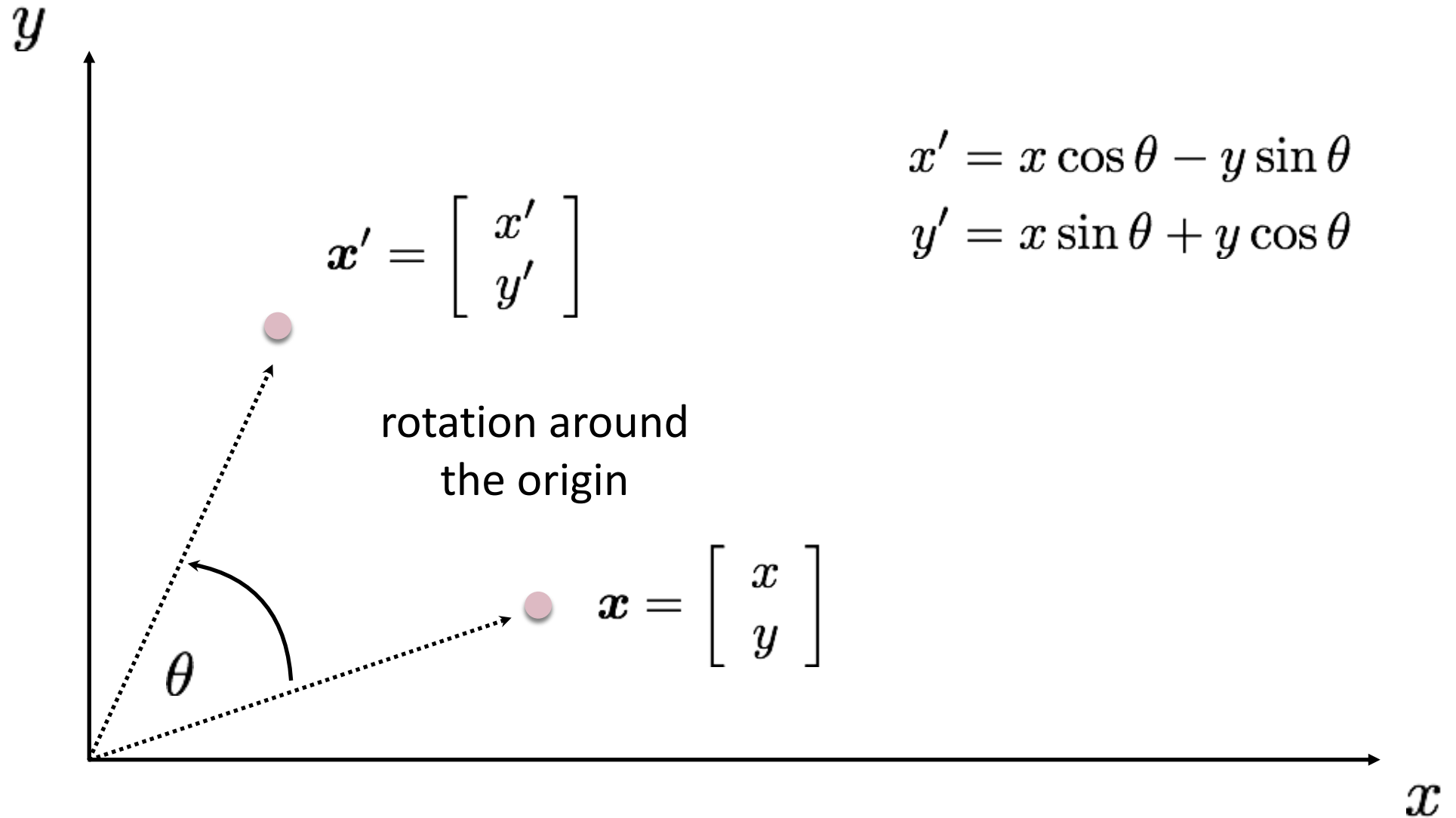


# 2D planar transformations

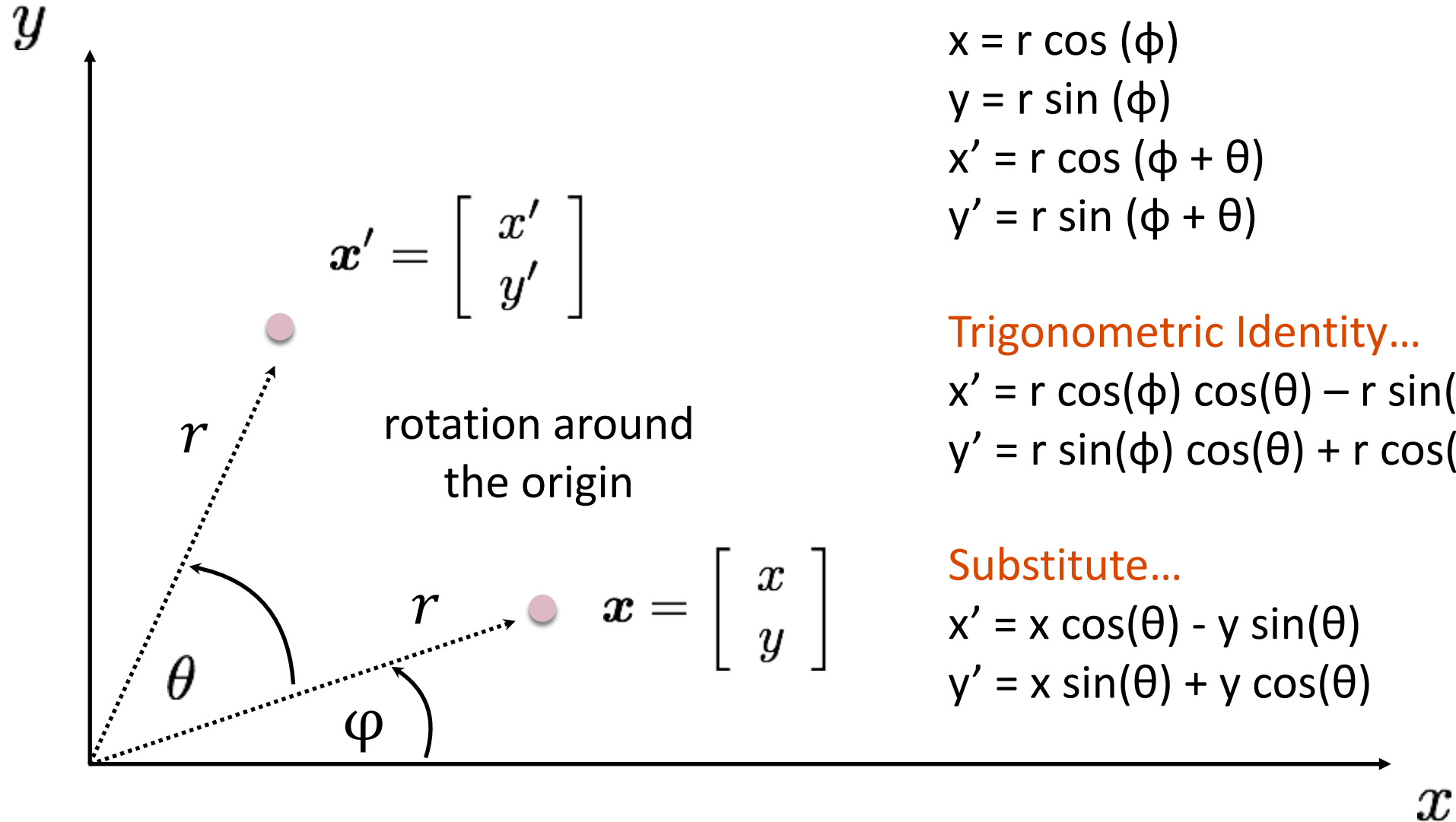




# 2D planar transformations



# 2D planar transformations



Polar coordinates...

$$x = r \cos(\phi)$$

$$y = r \sin(\phi)$$

$$x' = r \cos(\phi + \theta)$$

$$y' = r \sin(\phi + \theta)$$

Trigonometric Identity...

$$x' = r \cos(\phi) \cos(\theta) - r \sin(\phi) \sin(\theta)$$

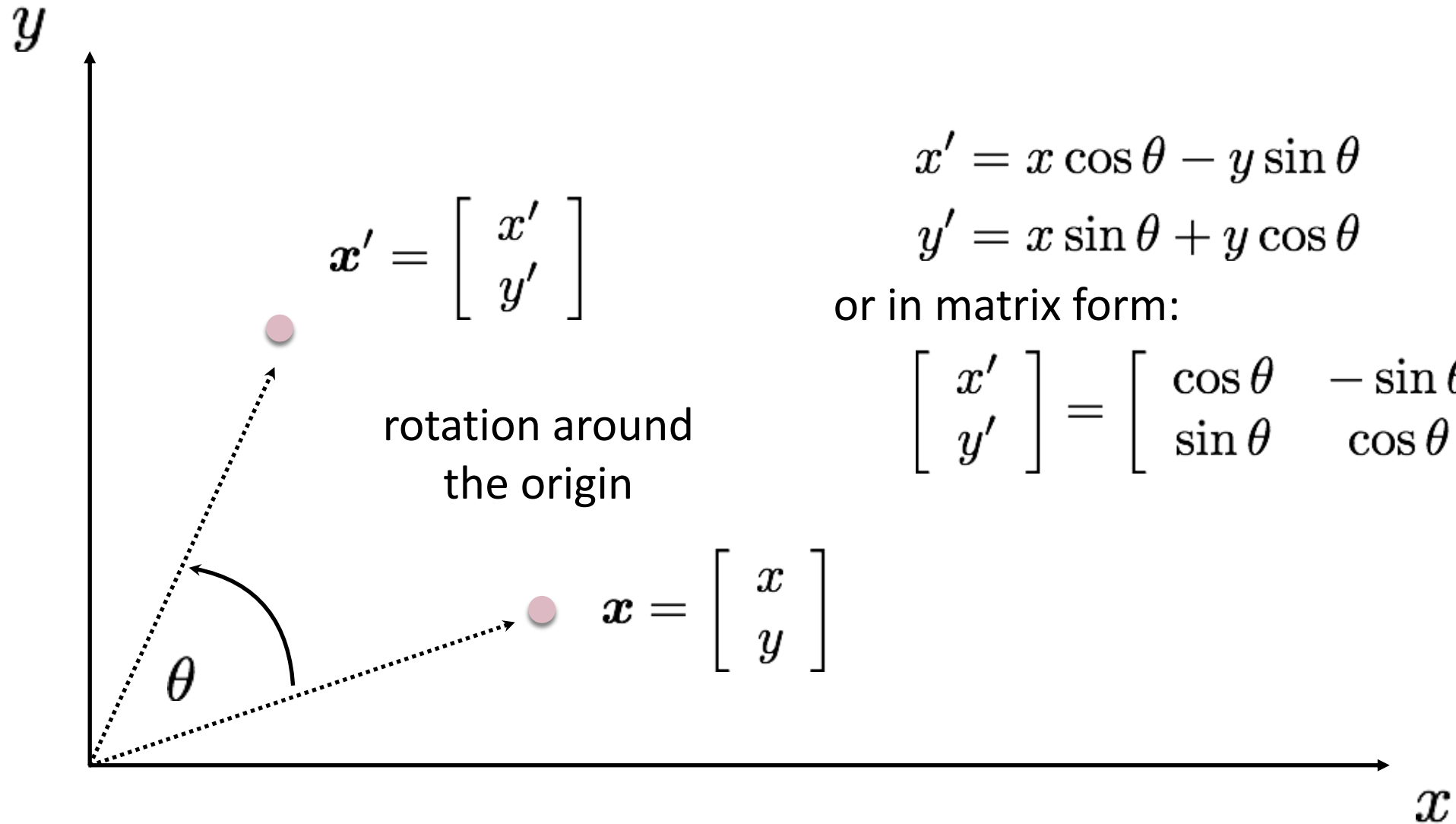
$$y' = r \sin(\phi) \cos(\theta) + r \cos(\phi) \sin(\theta)$$

Substitute...

$$x' = x \cos(\theta) - y \sin(\theta)$$

$$y' = x \sin(\theta) + y \cos(\theta)$$

# 2D planar transformations



$$x' = x \cos \theta - y \sin \theta$$

$$y' = x \sin \theta + y \cos \theta$$

or in matrix form:

$$\begin{bmatrix} x' \\ y' \end{bmatrix} = \begin{bmatrix} \cos \theta & -\sin \theta \\ \sin \theta & \cos \theta \end{bmatrix} \begin{bmatrix} x \\ y \end{bmatrix}$$

# 2D planar and linear transformations

$$\boldsymbol{x}' = f(\boldsymbol{x}; p)$$



$$\begin{bmatrix} x' \\ y' \end{bmatrix} = \boldsymbol{M} \begin{bmatrix} x \\ y \end{bmatrix}$$

parameters  $p$

point  $\boldsymbol{x}$

# 2D planar and linear transformations

Scale

$$\mathbf{M} = \begin{bmatrix} s_x & 0 \\ 0 & s_y \end{bmatrix}$$

Flip across y

$$\mathbf{M} = \begin{bmatrix} -1 & 0 \\ 0 & 1 \end{bmatrix}$$

Rotate

$$\mathbf{M} = \begin{bmatrix} \cos \theta & -\sin \theta \\ \sin \theta & \cos \theta \end{bmatrix}$$

Flip across origin

$$\mathbf{M} = \begin{bmatrix} -1 & 0 \\ 0 & -1 \end{bmatrix}$$

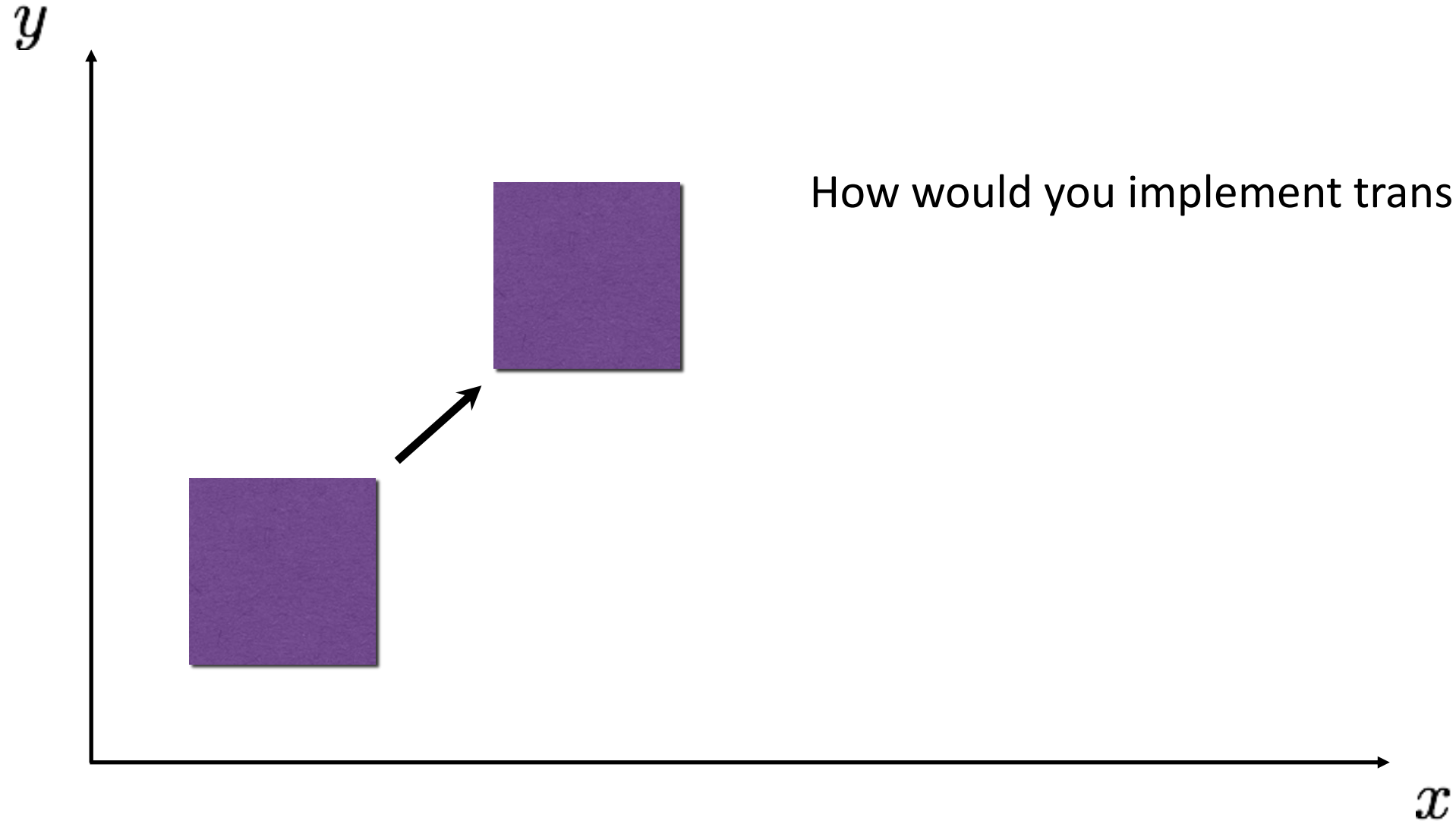
Shear

$$\mathbf{M} = \begin{bmatrix} 1 & s_x \\ s_y & 1 \end{bmatrix}$$

Identity

$$\mathbf{M} = \begin{bmatrix} 1 & 0 \\ 0 & 1 \end{bmatrix}$$

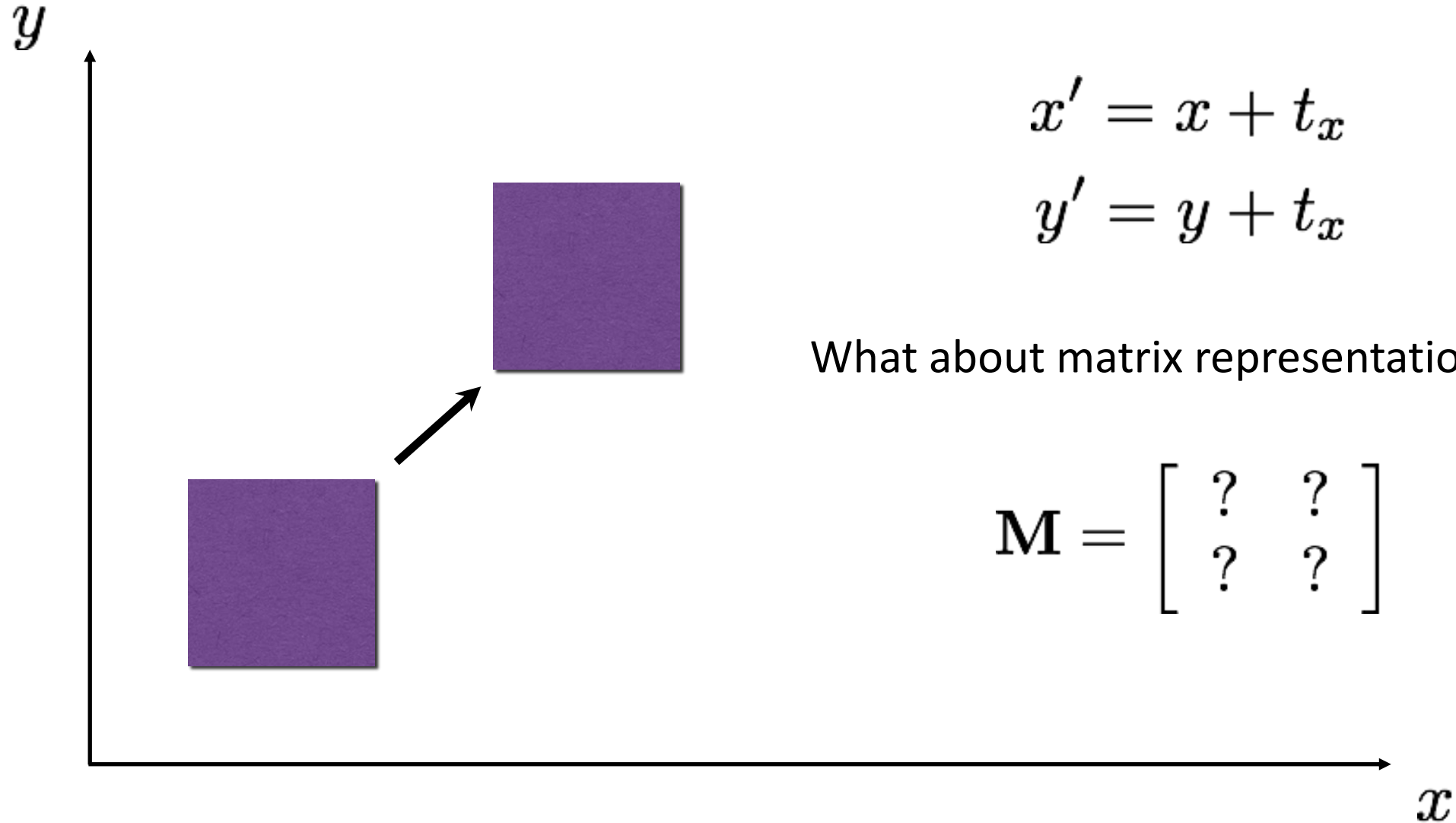
# 2D translation



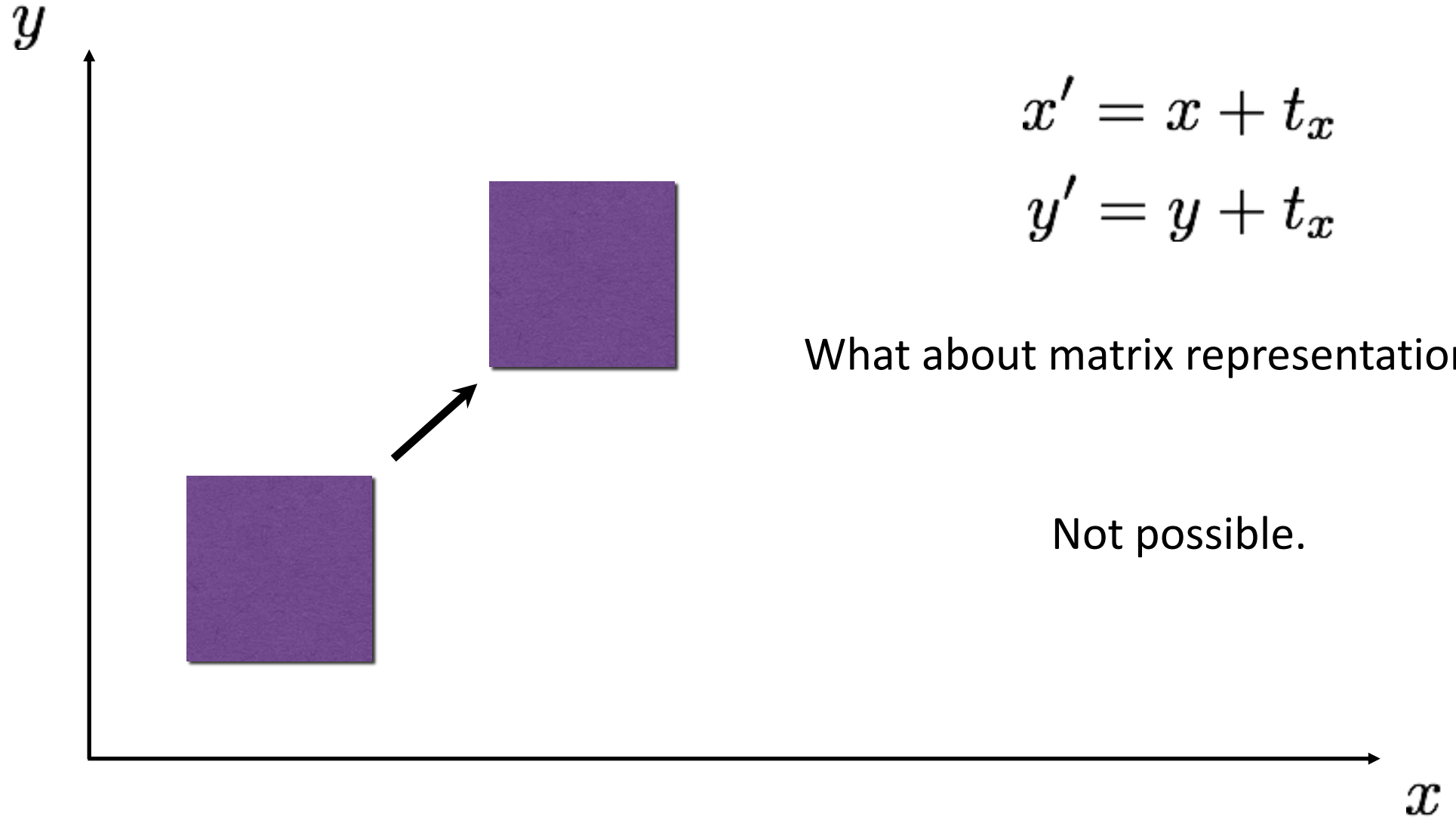
How would you implement translation?



# 2D translation



# 2D translation



# Projective geometry 101

# Homogeneous coordinates

heterogeneous  
coordinates

homogeneous  
coordinates

$$\begin{bmatrix} x \\ y \end{bmatrix} \Rightarrow \begin{bmatrix} x \\ y \\ 1 \end{bmatrix}$$

← add a 1 here

- Represent 2D point with a 3D vector

# Homogeneous coordinates

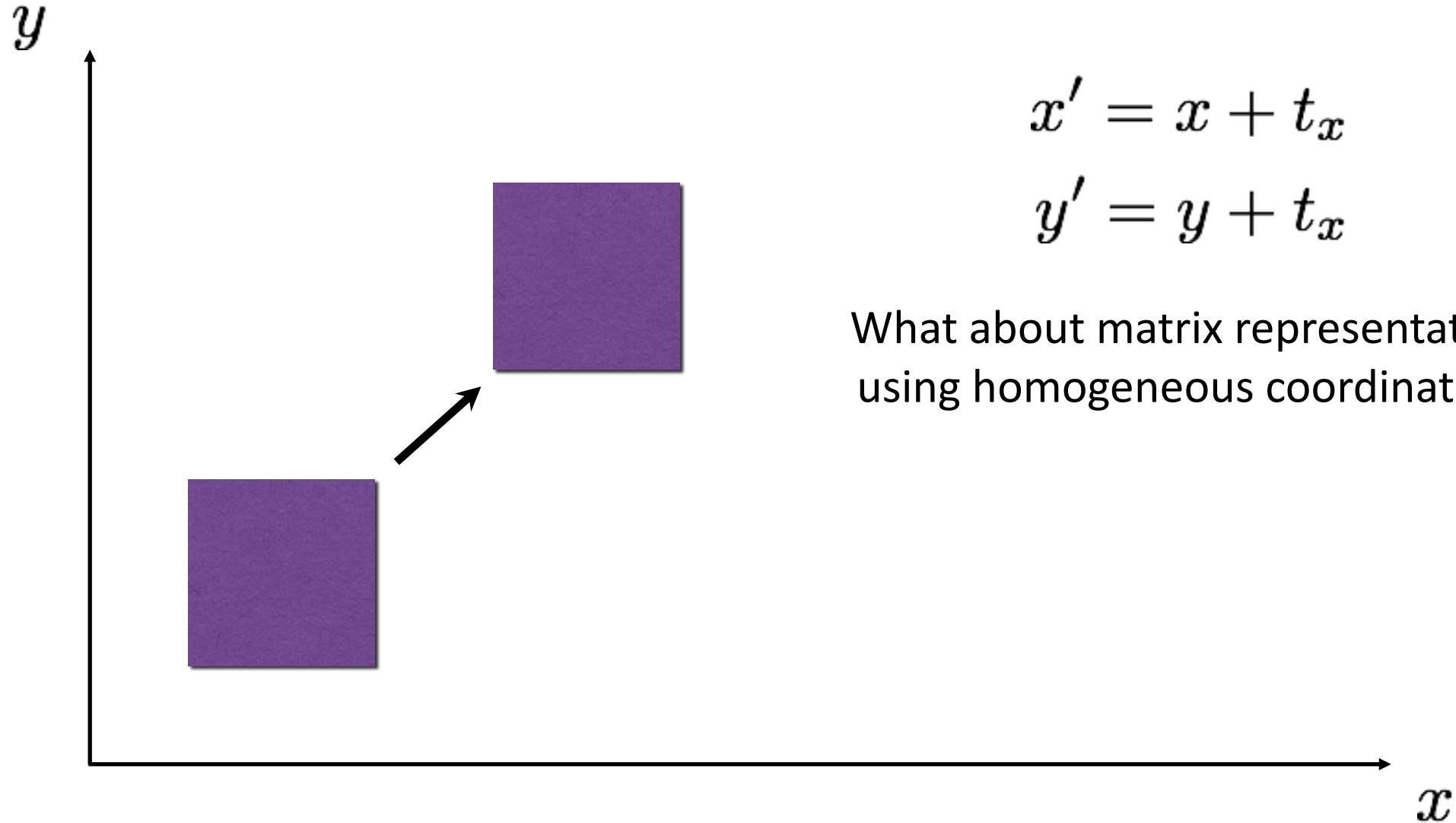
heterogeneous  
coordinates

homogeneous  
coordinates

$$\begin{bmatrix} x \\ y \end{bmatrix} \Rightarrow \begin{bmatrix} x \\ y \\ 1 \end{bmatrix} \stackrel{\text{def}}{=} \begin{bmatrix} ax \\ ay \\ a \end{bmatrix}$$

- Represent 2D point with a 3D vector
- 3D vectors are only defined up to scale

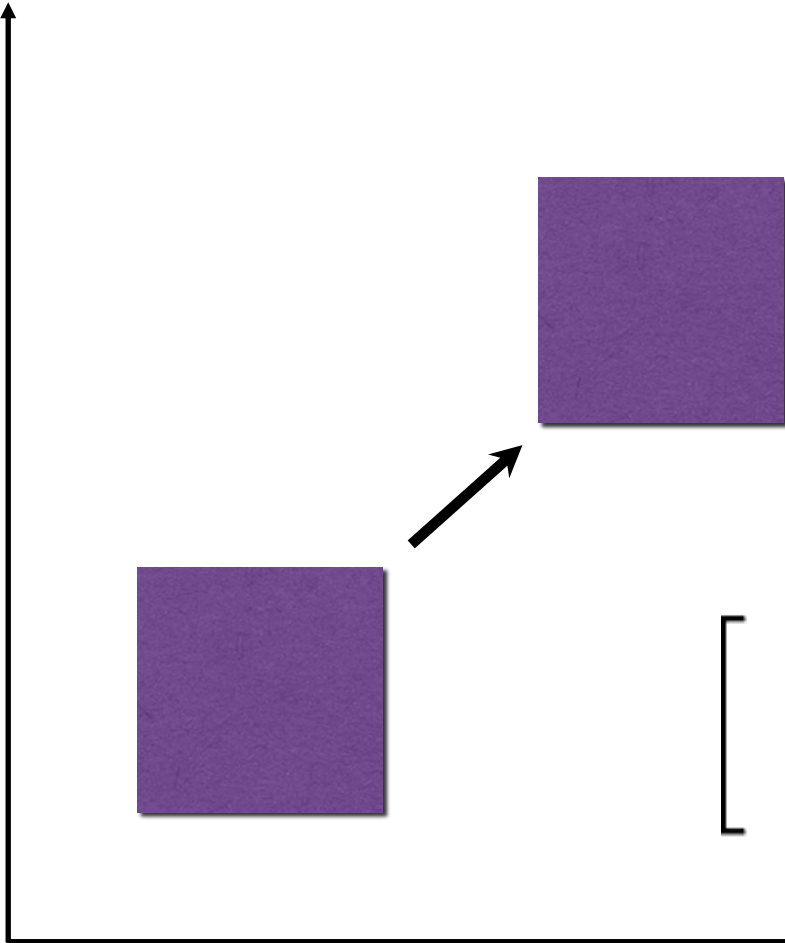
# 2D translation





# 2D translation

$y$



$$x' = x + t_x$$

$$y' = y + t_y$$

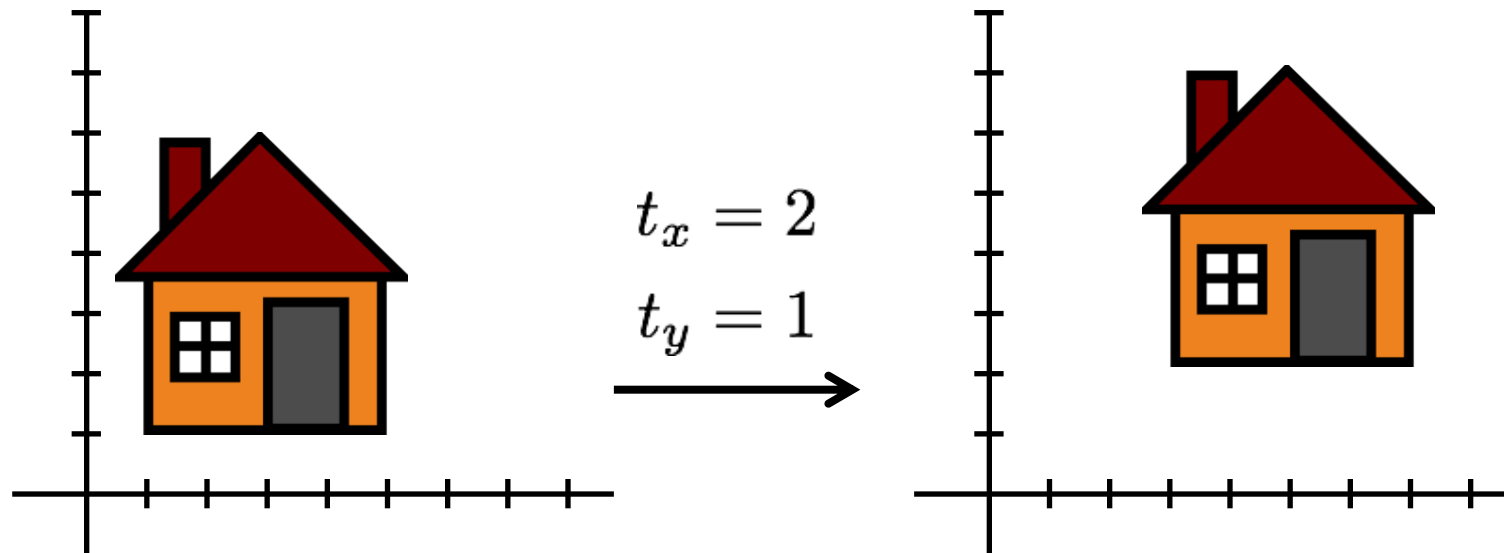
What about matrix representation using homogeneous coordinates?

$$\begin{bmatrix} x \\ y \\ 1 \end{bmatrix} \Rightarrow \begin{bmatrix} x \\ y \\ 1 \end{bmatrix} \mathbf{M} = \begin{bmatrix} 1 & 0 & t_x \\ 0 & 1 & t_y \\ 0 & 0 & 1 \end{bmatrix}$$

$x$

# 2D translation using homogeneous coordinates

$$\begin{bmatrix} x' \\ y' \\ 1 \end{bmatrix} = \begin{bmatrix} 1 & 0 & t_x \\ 0 & 1 & t_y \\ 0 & 0 & 1 \end{bmatrix} \begin{bmatrix} x \\ y \\ 1 \end{bmatrix} = \begin{bmatrix} x + t_x \\ y + t_y \\ 1 \end{bmatrix}$$



# Homogeneous coordinates

Conversion:

- heterogeneous  $\rightarrow$  homogeneous

$$\begin{bmatrix} x \\ y \end{bmatrix} \Rightarrow \begin{bmatrix} x \\ y \\ 1 \end{bmatrix}$$

- homogeneous  $\rightarrow$  heterogeneous

$$\begin{bmatrix} x \\ y \\ w \end{bmatrix} \Rightarrow \begin{bmatrix} x/w \\ y/w \end{bmatrix}$$

- scale invariance

$$\begin{bmatrix} x & y & w \end{bmatrix}^\top = \lambda \begin{bmatrix} x & y & w \end{bmatrix}^\top$$

Special points:

- point at infinity

$$\begin{bmatrix} x & y & 0 \end{bmatrix}$$

- undefined

$$\begin{bmatrix} 0 & 0 & 0 \end{bmatrix}$$

# Projective geometry

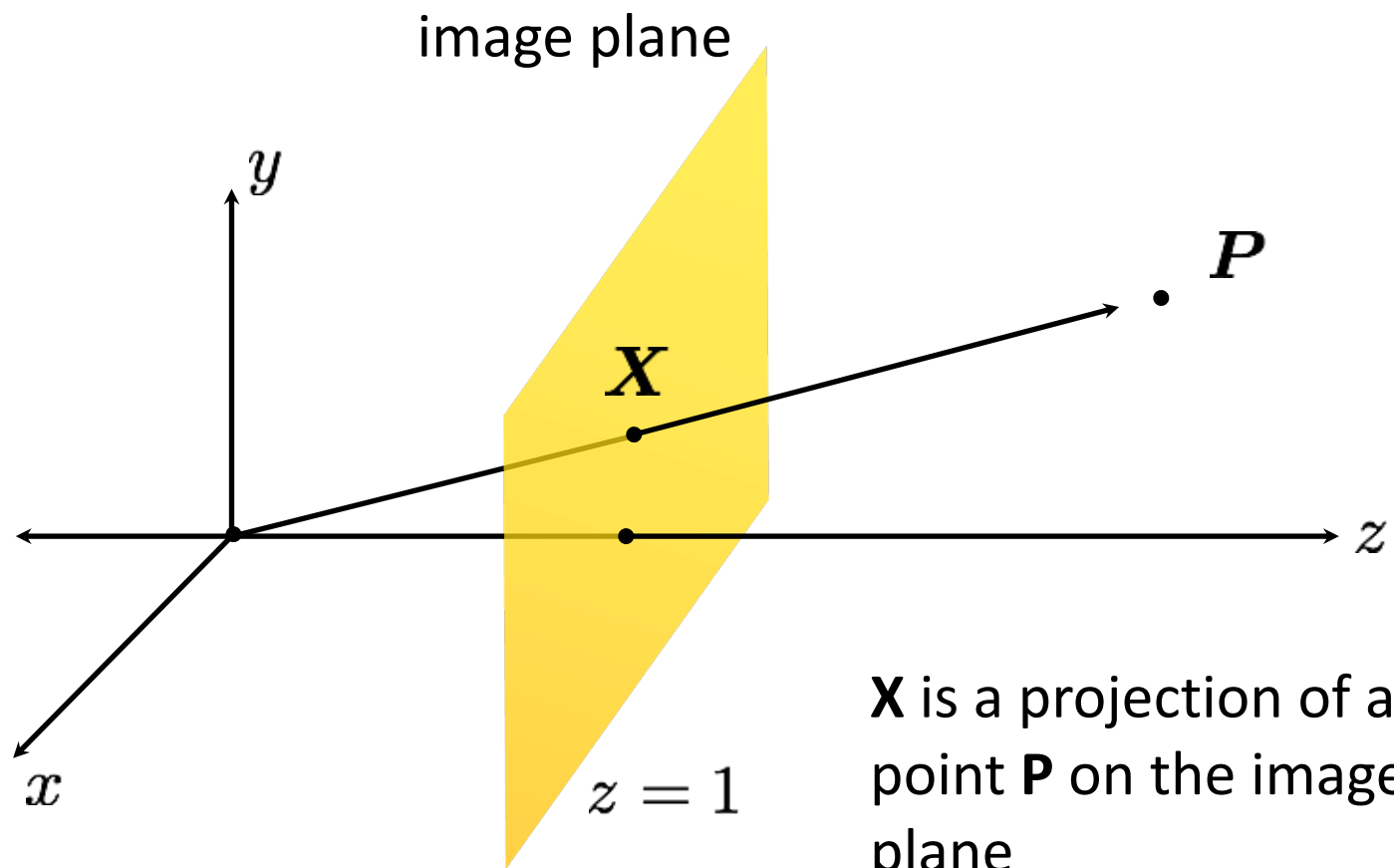
image point in  
pixel coordinates

$$\mathbf{x} = \begin{bmatrix} x \\ y \end{bmatrix}$$



image point in  
homogeneous  
coordinates

$$\mathbf{X} = \begin{bmatrix} x \\ y \\ 1 \end{bmatrix}$$



# Transformations in projective geometry

# 2D transformations in heterogeneous coordinates

Re-write these transformations as 3x3 matrices:

$$\begin{bmatrix} x' \\ y' \\ 1 \end{bmatrix} = \begin{bmatrix} 1 & 0 & t_x \\ 0 & 1 & t_y \\ 0 & 0 & 1 \end{bmatrix} \begin{bmatrix} x \\ y \\ 1 \end{bmatrix}$$

translation

$$\begin{bmatrix} x' \\ y' \\ 1 \end{bmatrix} = \begin{bmatrix} ? \\ ? \\ ? \end{bmatrix} \begin{bmatrix} x \\ y \\ 1 \end{bmatrix}$$

scaling

$$\begin{bmatrix} x' \\ y' \\ 1 \end{bmatrix} = \begin{bmatrix} ? \\ ? \\ ? \end{bmatrix} \begin{bmatrix} x \\ y \\ 1 \end{bmatrix}$$

rotation

$$\begin{bmatrix} x' \\ y' \\ 1 \end{bmatrix} = \begin{bmatrix} ? \\ ? \\ ? \end{bmatrix} \begin{bmatrix} x \\ y \\ 1 \end{bmatrix}$$

shearing

# 2D transformations in heterogeneous coordinates

Re-write these transformations as 3x3 matrices:

$$\begin{bmatrix} x' \\ y' \\ 1 \end{bmatrix} = \begin{bmatrix} 1 & 0 & t_x \\ 0 & 1 & t_y \\ 0 & 0 & 1 \end{bmatrix} \begin{bmatrix} x \\ y \\ 1 \end{bmatrix}$$

translation

$$\begin{bmatrix} x' \\ y' \\ 1 \end{bmatrix} = \begin{bmatrix} s_x & 0 & 0 \\ 0 & s_y & 0 \\ 0 & 0 & 1 \end{bmatrix} \begin{bmatrix} x \\ y \\ 1 \end{bmatrix}$$

scaling

$$\begin{bmatrix} x' \\ y' \\ 1 \end{bmatrix} = \begin{bmatrix} ? \\ ? \\ ? \end{bmatrix} \begin{bmatrix} x \\ y \\ 1 \end{bmatrix}$$

rotation

$$\begin{bmatrix} x' \\ y' \\ 1 \end{bmatrix} = \begin{bmatrix} ? \\ ? \\ ? \end{bmatrix} \begin{bmatrix} x \\ y \\ 1 \end{bmatrix}$$

shearing

# 2D transformations in heterogeneous coordinates

Re-write these transformations as 3x3 matrices:

$$\begin{bmatrix} x' \\ y' \\ 1 \end{bmatrix} = \begin{bmatrix} 1 & 0 & t_x \\ 0 & 1 & t_y \\ 0 & 0 & 1 \end{bmatrix} \begin{bmatrix} x \\ y \\ 1 \end{bmatrix}$$

translation

$$\begin{bmatrix} x' \\ y' \\ 1 \end{bmatrix} = \begin{bmatrix} s_x & 0 & 0 \\ 0 & s_y & 0 \\ 0 & 0 & 1 \end{bmatrix} \begin{bmatrix} x \\ y \\ 1 \end{bmatrix}$$

scaling

$$\begin{bmatrix} x' \\ y' \\ 1 \end{bmatrix} = \begin{bmatrix} & & \\ & ? & \\ & & \end{bmatrix} \begin{bmatrix} x \\ y \\ 1 \end{bmatrix}$$

rotation

$$\begin{bmatrix} x' \\ y' \\ 1 \end{bmatrix} = \begin{bmatrix} 1 & \beta_x & 0 \\ \beta_y & 1 & 0 \\ 0 & 0 & 1 \end{bmatrix} \begin{bmatrix} x \\ y \\ 1 \end{bmatrix}$$

shearing



# 2D transformations in heterogeneous coordinates

Re-write these transformations as 3x3 matrices:

$$\begin{bmatrix} x' \\ y' \\ 1 \end{bmatrix} = \begin{bmatrix} 1 & 0 & t_x \\ 0 & 1 & t_y \\ 0 & 0 & 1 \end{bmatrix} \begin{bmatrix} x \\ y \\ 1 \end{bmatrix}$$

translation

$$\begin{bmatrix} x' \\ y' \\ 1 \end{bmatrix} = \begin{bmatrix} s_x & 0 & 0 \\ 0 & s_y & 0 \\ 0 & 0 & 1 \end{bmatrix} \begin{bmatrix} x \\ y \\ 1 \end{bmatrix}$$

scaling

$$\begin{bmatrix} x' \\ y' \\ 1 \end{bmatrix} = \begin{bmatrix} \cos \Theta & -\sin \Theta & 0 \\ \sin \Theta & \cos \Theta & 0 \\ 0 & 0 & 1 \end{bmatrix} \begin{bmatrix} x \\ y \\ 1 \end{bmatrix}$$

rotation

$$\begin{bmatrix} x' \\ y' \\ 1 \end{bmatrix} = \begin{bmatrix} 1 & \beta_x & 0 \\ \beta_y & 1 & 0 \\ 0 & 0 & 1 \end{bmatrix} \begin{bmatrix} x \\ y \\ 1 \end{bmatrix}$$

shearing

# Matrix composition

Transformations can be combined by matrix multiplication:

$$\begin{bmatrix} x' \\ y' \\ w' \end{bmatrix} = \left( \begin{bmatrix} 1 & 0 & tx \\ 0 & 1 & ty \\ 0 & 0 & 1 \end{bmatrix} \begin{bmatrix} \cos \Theta & -\sin \Theta & 0 \\ \sin \Theta & \cos \Theta & 0 \\ 0 & 0 & 1 \end{bmatrix} \begin{bmatrix} sx & 0 & 0 \\ 0 & sy & 0 \\ 0 & 0 & 1 \end{bmatrix} \right) \begin{bmatrix} x \\ y \\ w \end{bmatrix}$$

$\mathbf{p}' = \quad ? \quad ? \quad ? \quad \mathbf{p}$

# Matrix composition

Transformations can be combined by matrix multiplication:

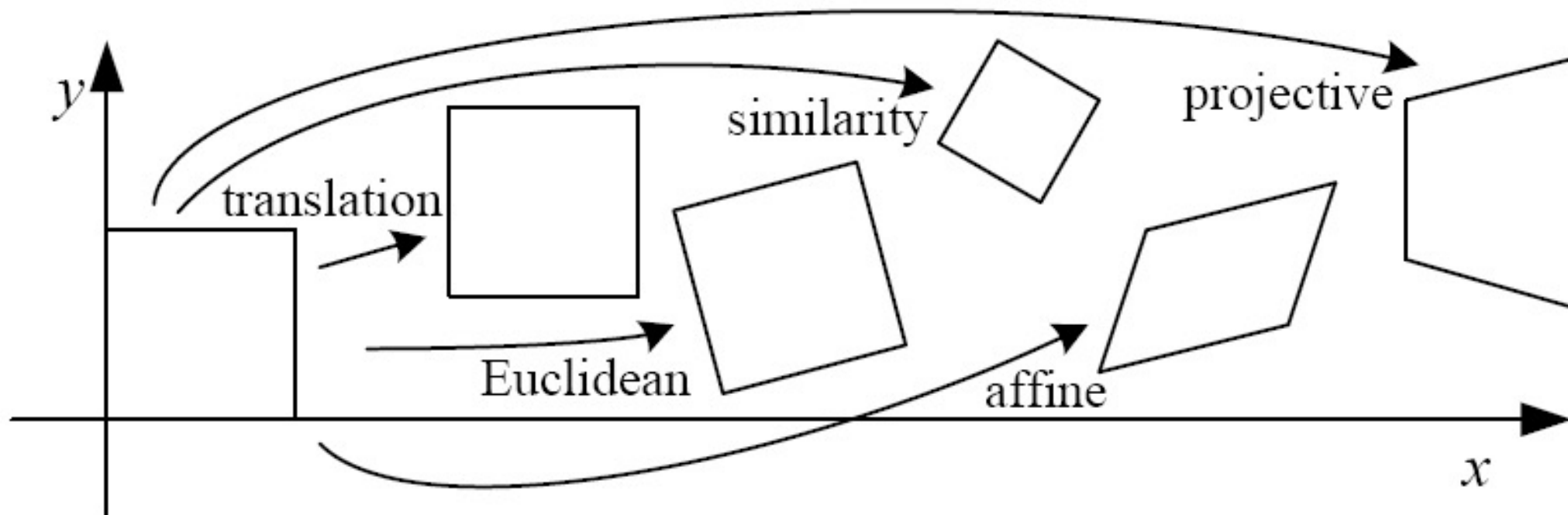
$$\begin{bmatrix} x' \\ y' \\ w' \end{bmatrix} = \left( \begin{bmatrix} 1 & 0 & tx \\ 0 & 1 & ty \\ 0 & 0 & 1 \end{bmatrix} \begin{bmatrix} \cos \Theta & -\sin \Theta & 0 \\ \sin \Theta & \cos \Theta & 0 \\ 0 & 0 & 1 \end{bmatrix} \begin{bmatrix} sx & 0 & 0 \\ 0 & sy & 0 \\ 0 & 0 & 1 \end{bmatrix} \right) \begin{bmatrix} x \\ y \\ w \end{bmatrix}$$

$\mathbf{p}'$  = translation( $t_x, t_y$ )      rotation( $\theta$ )      scale( $s, s$ )       $\mathbf{p}$

Does the multiplication order matter?

# Classification of 2D transformations

# Classification of 2D transformations



# Classification of 2D transformations

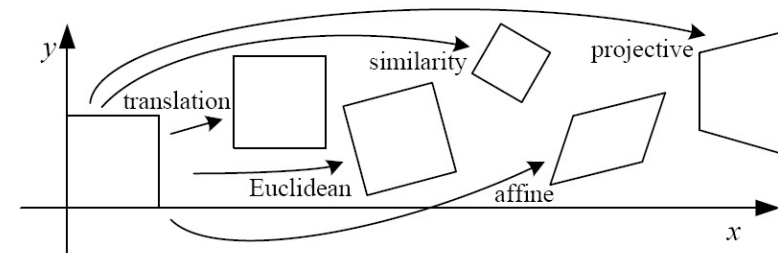
Name	Matrix	# D.O.F.
translation	$\begin{bmatrix} \mathbf{I} &   & \mathbf{t} \end{bmatrix}$	?
rigid (Euclidean)	$\begin{bmatrix} \mathbf{R} &   & \mathbf{t} \end{bmatrix}$	?
similarity	$\begin{bmatrix} s\mathbf{R} &   & \mathbf{t} \end{bmatrix}$	?
affine	$\begin{bmatrix} \mathbf{A} \end{bmatrix}$	?
projective	$\begin{bmatrix} \tilde{\mathbf{H}} \end{bmatrix}$	?

# Classification of 2D transformations

Translation:

$$\begin{bmatrix} 1 & 0 & t_1 \\ 0 & 1 & t_2 \\ 0 & 0 & 1 \end{bmatrix}$$

How many degrees of freedom?

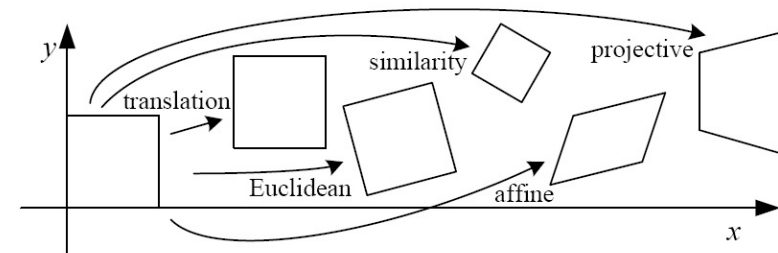


# Classification of 2D transformations

Euclidean (rigid):  
rotation + translation

$$\begin{bmatrix} r_1 & r_2 & r_3 \\ r_4 & r_5 & r_6 \\ 0 & 0 & 1 \end{bmatrix}$$

Are there any values that are related?



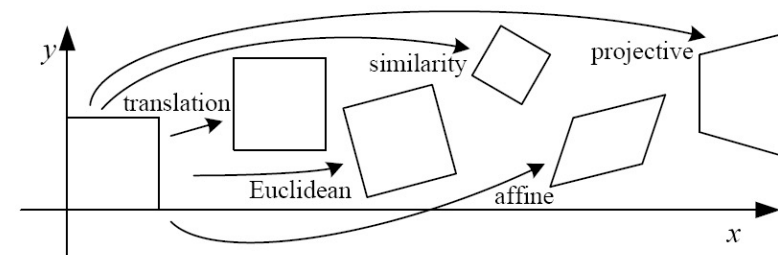


# Classification of 2D transformations

Euclidean (rigid):  
rotation + translation

$$\begin{bmatrix} \cos \theta & -\sin \theta & r_3 \\ \sin \theta & \cos \theta & r_6 \\ 0 & 0 & 1 \end{bmatrix}$$

How many degrees of freedom?

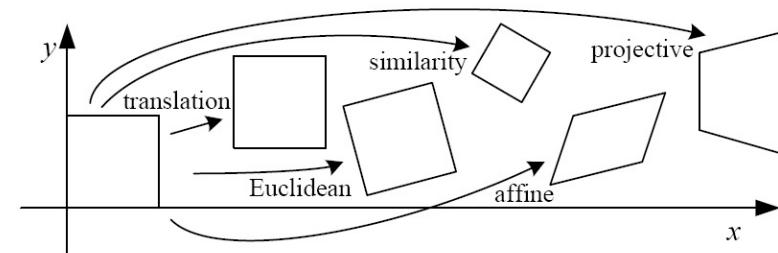


# Classification of 2D transformations

which other matrix values  
will change if this increases?

Euclidean (rigid):  
rotation + translation

$$\begin{bmatrix} \cos \theta & -\sin \theta & r_3 \\ \sin \theta & \cos \theta & r_6 \\ 0 & 0 & 1 \end{bmatrix}$$



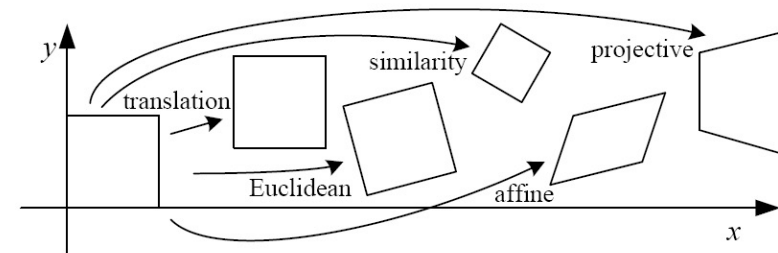
# Classification of 2D transformations

what will happen to the  
image if this increases?



Euclidean (rigid):  
rotation + translation

$$\begin{bmatrix} \cos \theta & -\sin \theta & r_3 \\ \sin \theta & \cos \theta & r_6 \\ 0 & 0 & 1 \end{bmatrix}$$



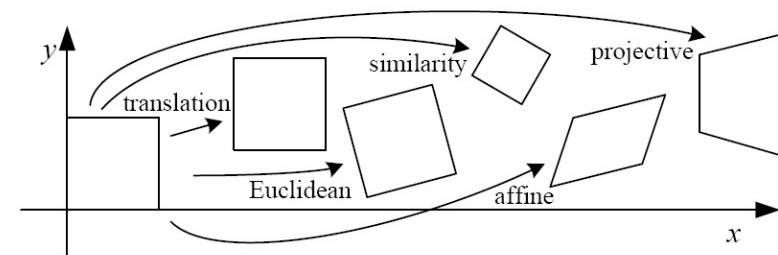
# Classification of 2D transformations

what will happen to the  
image if this increases?



Euclidean (rigid):  
rotation + translation

$$\begin{bmatrix} \cos \theta & -\sin \theta & r_3 \\ \sin \theta & \cos \theta & r_6 \\ 0 & 0 & 1 \end{bmatrix}$$

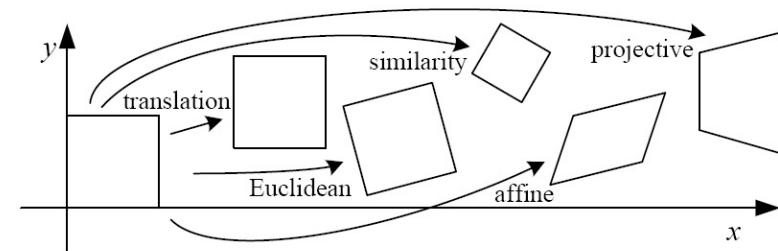


# Classification of 2D transformations

Similarity:  
uniform scaling + rotation  
+ translation

$$\begin{bmatrix} r_1 & r_2 & r_3 \\ r_4 & r_5 & r_6 \\ 0 & 0 & 1 \end{bmatrix}$$

Are there any values that are related?



# Classification of 2D transformations

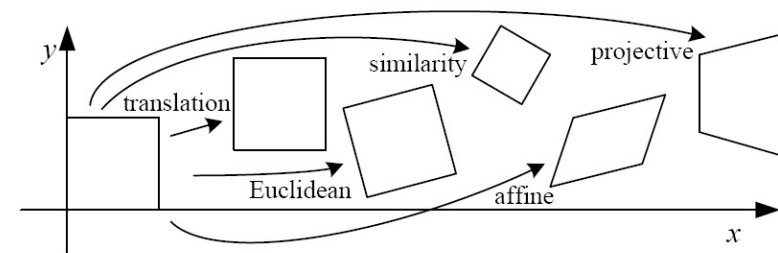
multiply these four by scale  $s$



Similarity:  
uniform scaling + rotation  
+ translation

$$\begin{bmatrix} \cos \theta & -\sin \theta & r_3 \\ \sin \theta & \cos \theta & r_6 \\ 0 & 0 & 1 \end{bmatrix}$$

How many degrees of freedom?

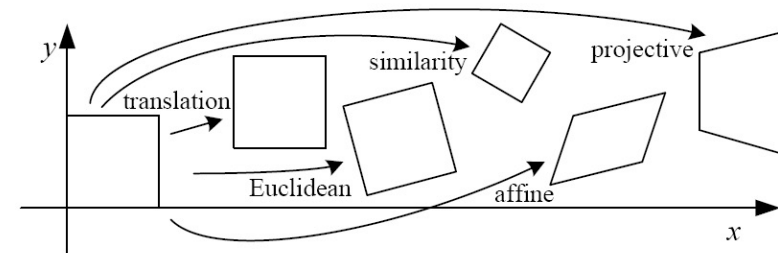


# Classification of 2D transformations

what will happen to the  
image if this increases?

Similarity:  
uniform scaling + rotation  
+ translation

$$\begin{matrix} \downarrow \\ \begin{bmatrix} r_1 & r_2 & r_3 \\ r_4 & r_5 & r_6 \\ 0 & 0 & 1 \end{bmatrix} \end{matrix}$$

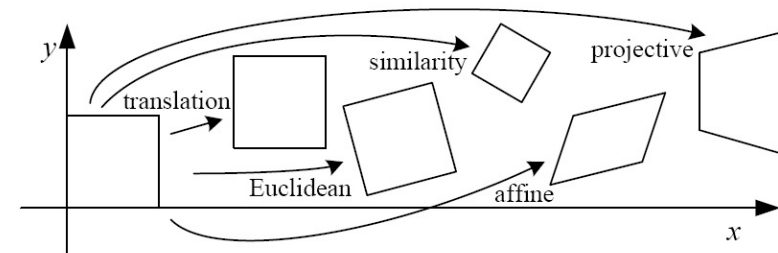


# Classification of 2D transformations

Affine transform:  
uniform scaling + shearing  
+ rotation + translation

$$\begin{bmatrix} a_1 & a_2 & a_3 \\ a_4 & a_5 & a_6 \\ 0 & 0 & 1 \end{bmatrix}$$

Are there any values that are related?





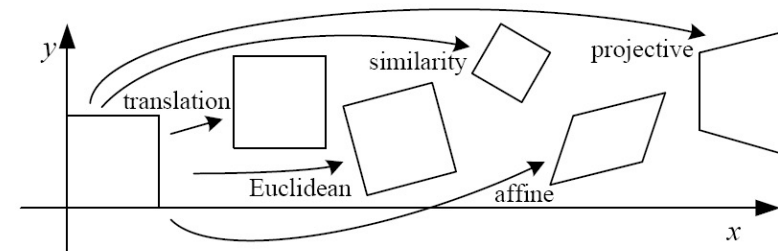
# Classification of 2D transformations

Affine transform:  
uniform scaling + shearing  
+ rotation + translation

$$\begin{bmatrix} a_1 & a_2 & a_3 \\ a_4 & a_5 & a_6 \\ 0 & 0 & 1 \end{bmatrix}$$

Are there any values that are related?

$$\begin{bmatrix} sr_1 & sr_2 \\ sr_3 & sr_4 \end{bmatrix} \begin{bmatrix} 1 & h_1 \\ h_2 & 1 \end{bmatrix} = \begin{bmatrix} sr_1 + h_2 sr_2 & sr_2 + h_1 sr_1 \\ sr_3 + h_2 sr_4 & sr_4 + h_1 sr_3 \end{bmatrix}$$



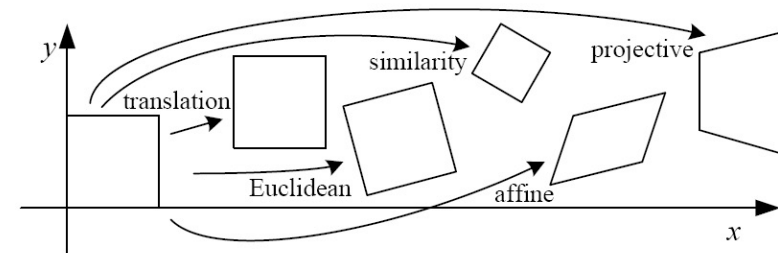
# Classification of 2D transformations

Affine transform:  
uniform scaling + shearing  
+ rotation + translation

$$\begin{bmatrix} a_1 & a_2 & a_3 \\ a_4 & a_5 & a_6 \\ 0 & 0 & 1 \end{bmatrix}$$

How many degrees of freedom?

$$\begin{array}{cc} \text{similarity} & \text{shear} \\ \begin{bmatrix} sr_1 & sr_2 \\ sr_3 & sr_4 \end{bmatrix} & \begin{bmatrix} 1 & h_1 \\ h_2 & 1 \end{bmatrix} \end{array} = \begin{bmatrix} sr_1 + h_2 sr_2 & sr_2 + h_1 sr_1 \\ sr_3 + h_2 sr_4 & sr_4 + h_1 sr_3 \end{bmatrix}$$



# Affine transformations

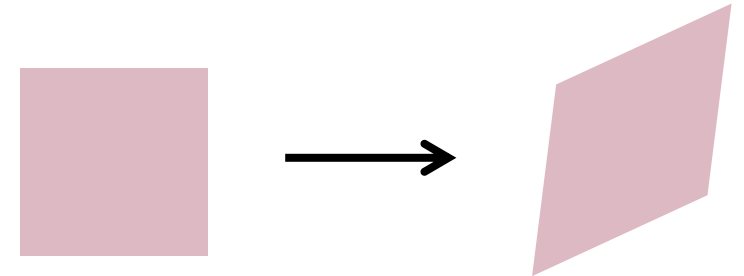
Affine transformations are combinations of

- arbitrary (4-DOF) linear transformations; and
- translations

$$\begin{bmatrix} x' \\ y' \\ w' \end{bmatrix} = \begin{bmatrix} a & b & c \\ d & e & f \\ 0 & 0 & 1 \end{bmatrix} \begin{bmatrix} x \\ y \\ w \end{bmatrix}$$

Properties of affine transformations:

- **origin does not necessarily map to origin**
- lines map to lines
- parallel lines map to parallel lines
- ratios are preserved
- compositions of affine transforms are also affine transforms



Does the last coordinate  $w$  ever change?

# Affine transformations

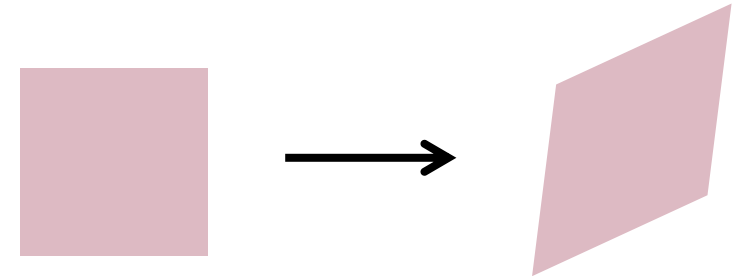
Affine transformations are combinations of

- arbitrary (4-DOF) linear transformations; and
- translations

$$\begin{bmatrix} x' \\ y' \\ w' \end{bmatrix} = \begin{bmatrix} a & b & c \\ d & e & f \\ 0 & 0 & 1 \end{bmatrix} \begin{bmatrix} x \\ y \\ w \end{bmatrix}$$

Properties of affine transformations:

- **origin does not necessarily map to origin**
- lines map to lines
- parallel lines map to parallel lines
- ratios are preserved
- compositions of affine transforms are also affine transforms



Nope! But what does that mean?

# How to interpret affine transformations here?

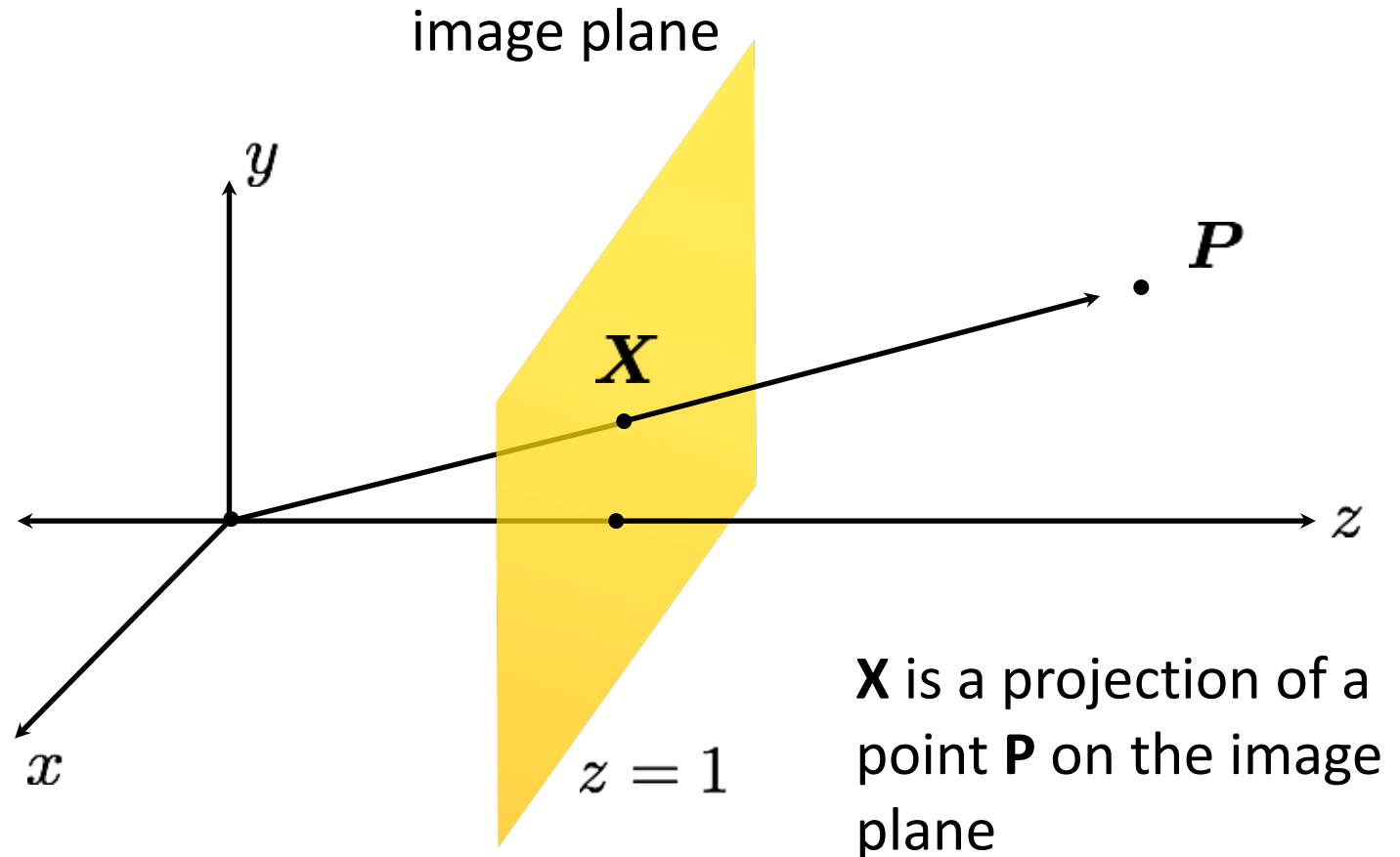
image point in  
pixel coordinates

$$\mathbf{x} = \begin{bmatrix} x \\ y \end{bmatrix}$$



image point in  
heterogeneous  
coordinates

$$\mathbf{X} = \begin{bmatrix} x \\ y \\ 1 \end{bmatrix}$$



# Projective transformations (aka homographies)

Projective transformations are combinations of

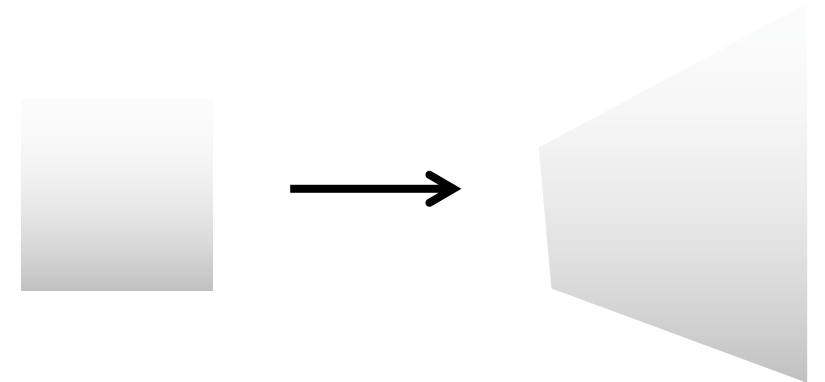
- affine transformations; and
- projective wraps

$$\begin{bmatrix} x' \\ y' \\ w' \end{bmatrix} = \begin{bmatrix} a & b & c \\ d & e & f \\ g & h & i \end{bmatrix} \begin{bmatrix} x \\ y \\ w \end{bmatrix}$$

How many degrees of freedom?

Properties of projective transformations:

- **origin does not necessarily map to origin**
- lines map to lines
- **parallel lines do not necessarily map to parallel lines**
- **ratios are not necessarily preserved**
- compositions of projective transforms are also projective transforms



# Projective transformations (aka homographies)

Projective transformations are combinations of

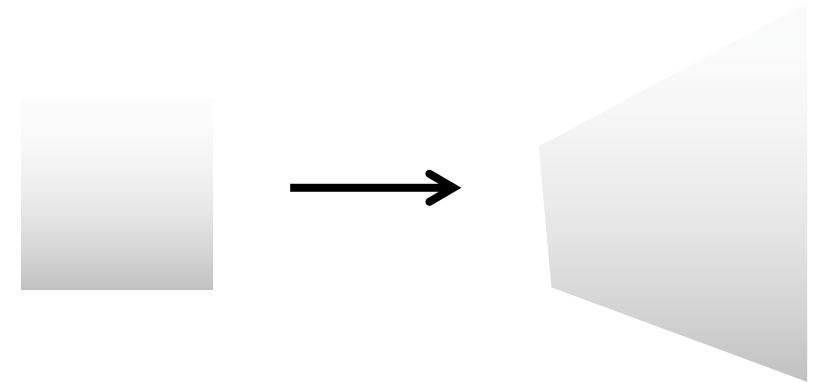
- affine transformations; and
- projective wraps

$$\begin{bmatrix} x' \\ y' \\ w' \end{bmatrix} = \begin{bmatrix} a & b & c \\ d & e & f \\ g & h & i \end{bmatrix} \begin{bmatrix} x \\ y \\ w \end{bmatrix}$$

Properties of projective transformations:

- origin does not necessarily map to origin
- lines map to lines
- parallel lines do not necessarily map to parallel lines
- ratios are not necessarily preserved
- compositions of projective transforms are also projective transforms

8 DOF: vectors (and therefore matrices) are defined up to scale)



# How to interpret projective transformations here?

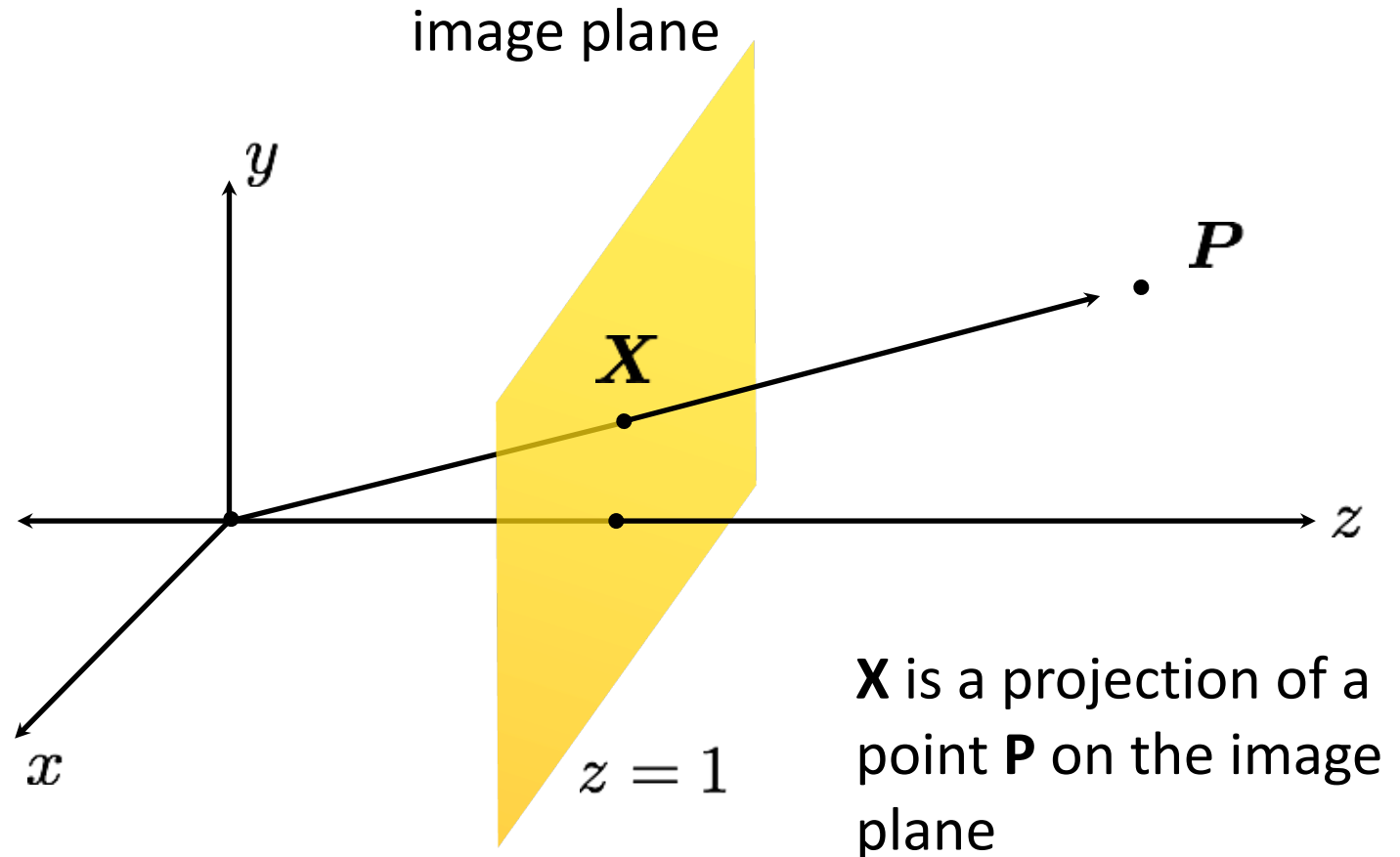
image point in  
pixel coordinates

$$\mathbf{x} = \begin{bmatrix} x \\ y \end{bmatrix}$$



image point in  
heterogeneous  
coordinates

$$\mathbf{X} = \begin{bmatrix} x \\ y \\ 1 \end{bmatrix}$$

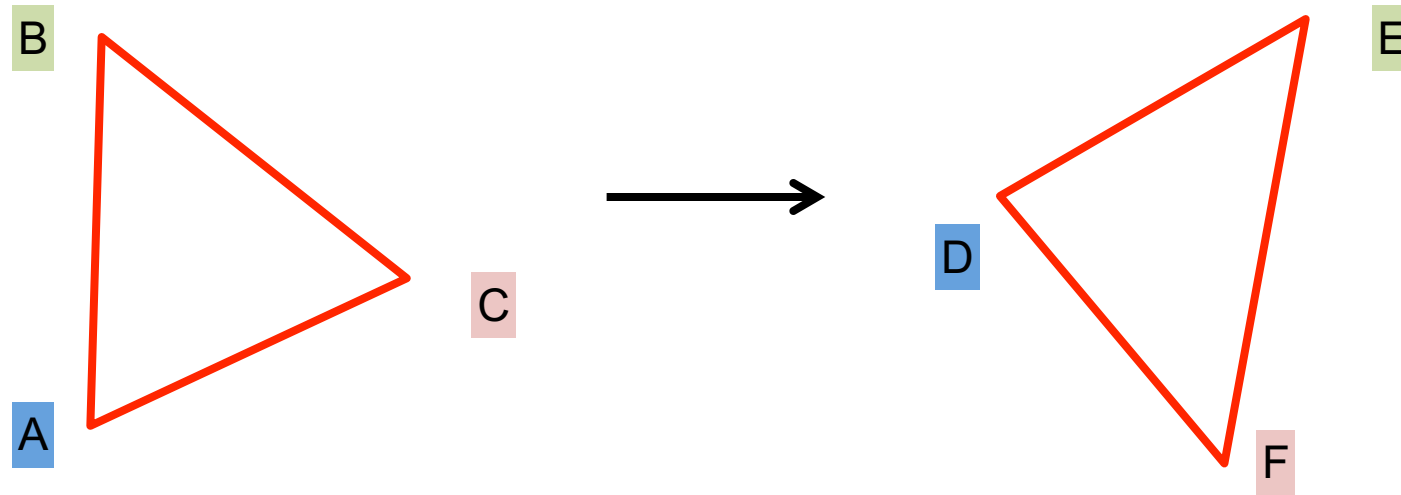




Determining unknown (affine) 2D transformations

# Determining unknown transformations

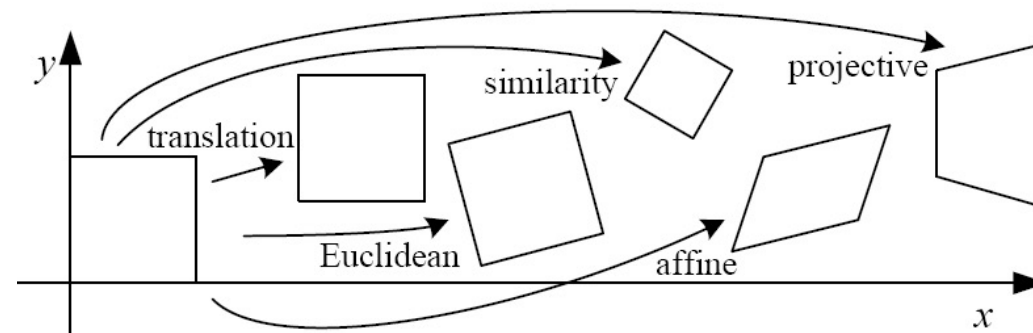
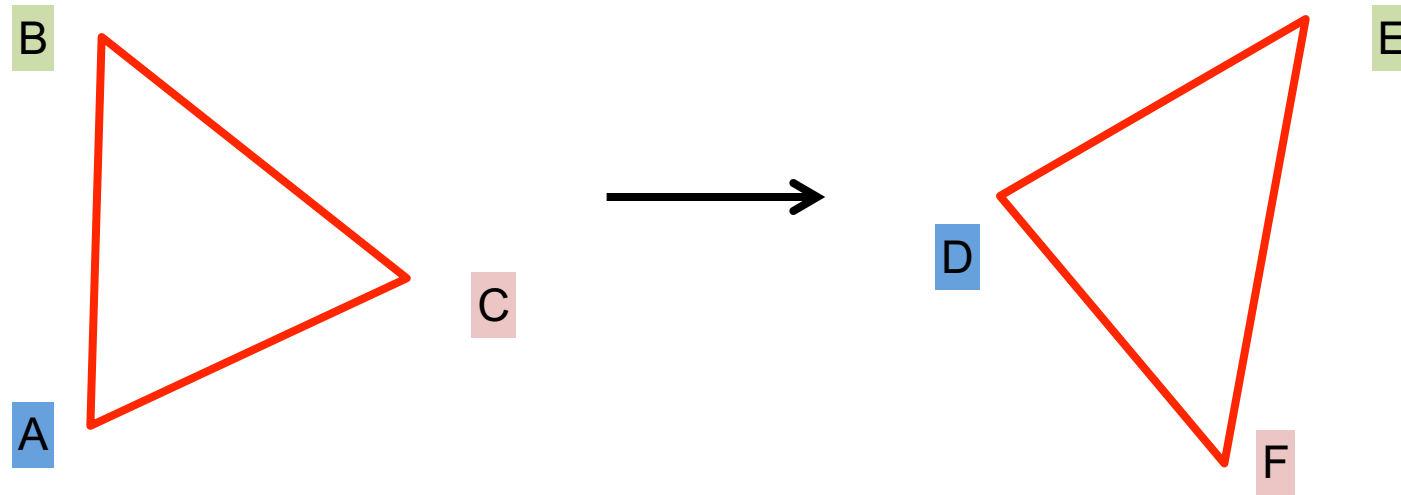
Suppose we have two triangles: ABC and DEF.



# Determining unknown transformations

Suppose we have two triangles: ABC and DEF.

- What type of transformation will map A to D, B to E, and C to F?

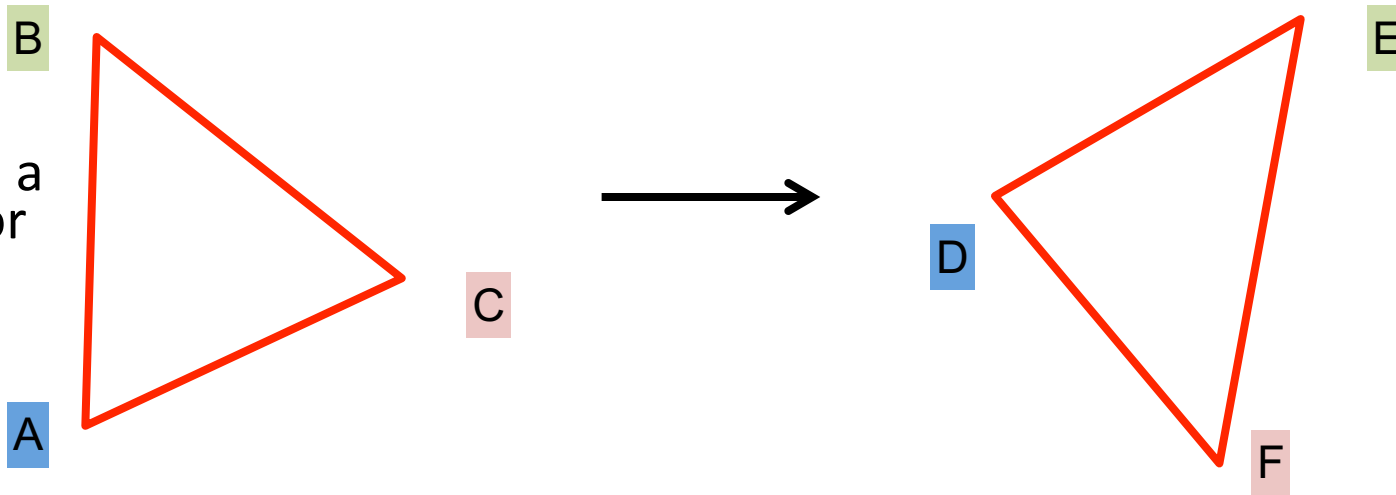


# Determining unknown transformations

Suppose we have two triangles: ABC and DEF.

- What type of transformation will map A to D, B to E, and C to F?
- How do we determine the unknown parameters?

Important: We will see a different procedure for dealing with homographies!



Affine transform:  
uniform scaling + shearing  
+ rotation + translation

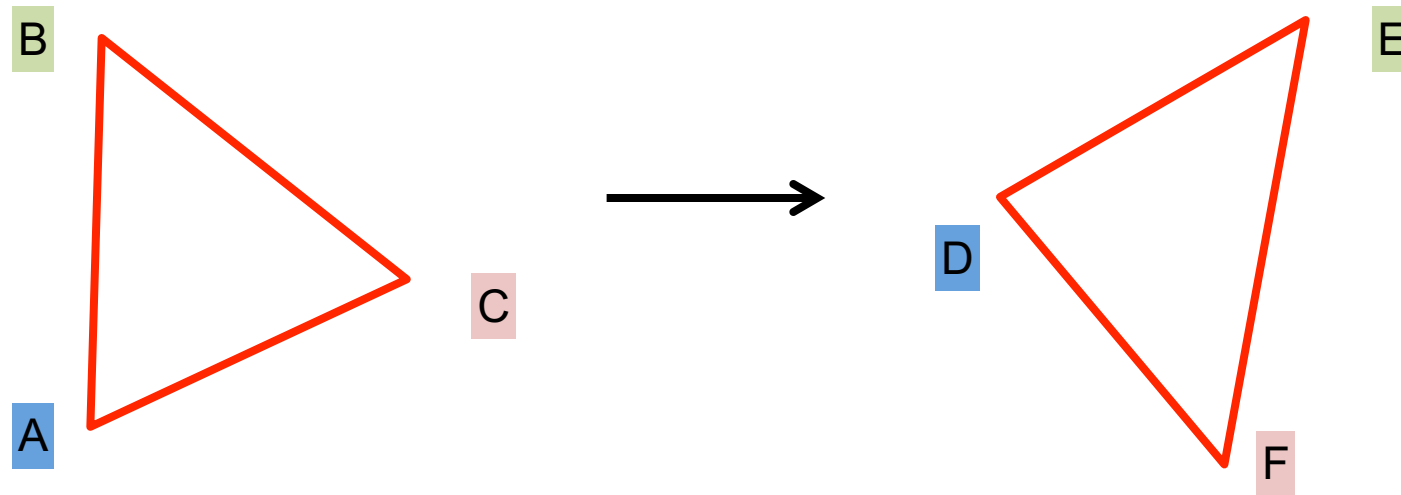
$$\begin{bmatrix} a_1 & a_2 & a_3 \\ a_4 & a_5 & a_6 \\ 0 & 0 & 1 \end{bmatrix}$$

How many degrees of freedom do we have?

# Determining unknown transformations

Suppose we have two triangles: ABC and DEF.

- What type of transformation will map A to D, B to E, and C to F?
- How do we determine the unknown parameters?



unknowns

$$x' = Mx$$

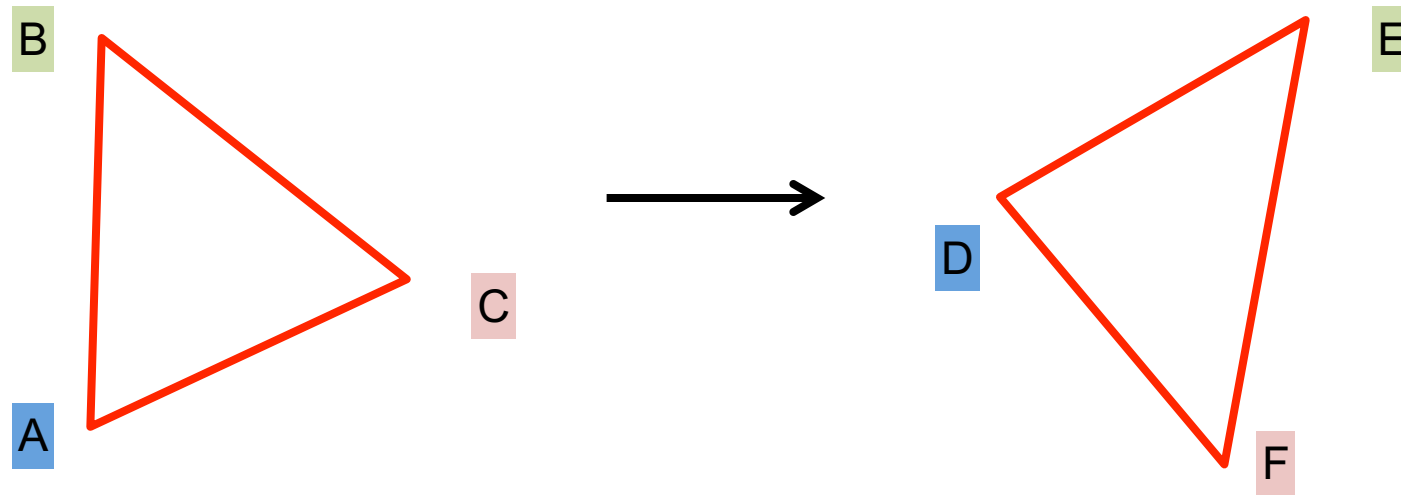
point correspondences

- One point correspondence gives how many equations?
- How many point correspondences do we need?

# Determining unknown transformations

Suppose we have two triangles: ABC and DEF.

- What type of transformation will map A to D, B to E, and C to F?
- How do we determine the unknown parameters?

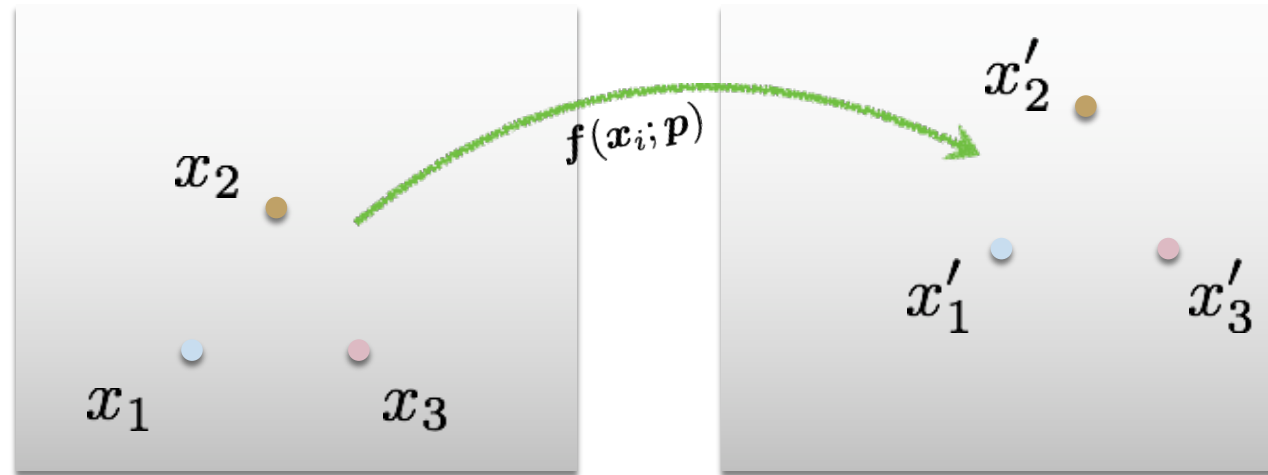


unknowns

$$x' = Mx$$

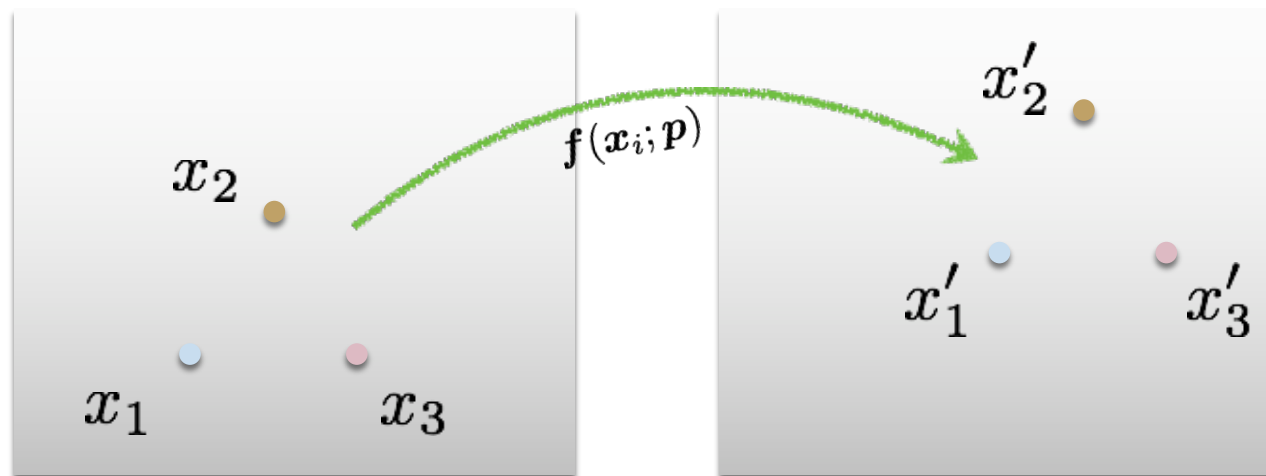
point correspondences

How do we solve this for **M**?



## Least Squares Error

$$E_{\text{LS}} = \sum_i \|\mathbf{f}(x_i; \mathbf{p}) - x'_i\|^2$$



## Least Squares Error

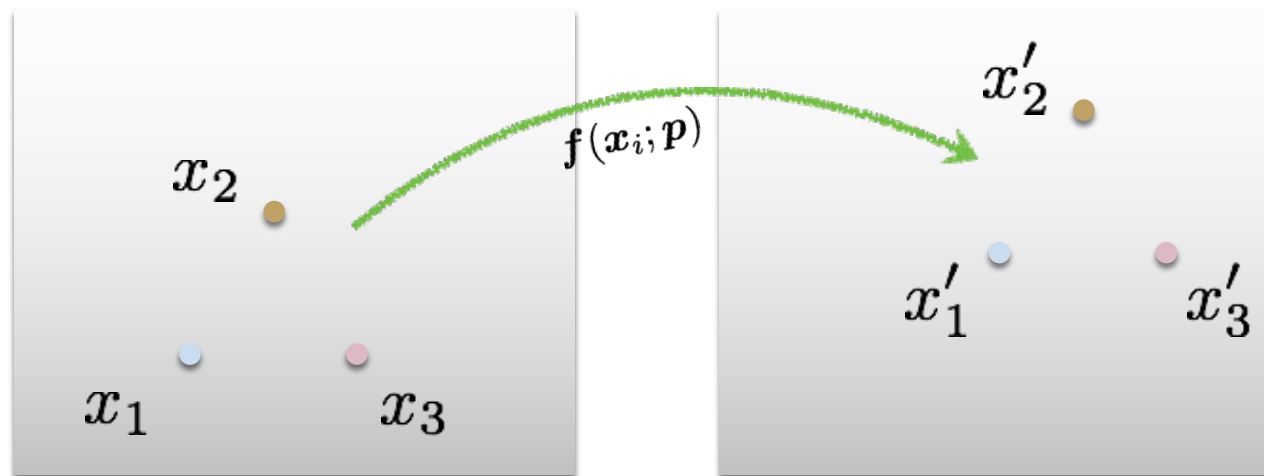
$$E_{\text{LS}} = \sum_i \left\| \mathbf{f}(\mathbf{x}_i; \mathbf{p}) - \mathbf{x}'_i \right\|^2$$

What is this?

What is this?

What is this?





$$\|x\| = \sqrt{x_1^2 + x_2^2 + \dots + x_n^2}$$

## Least Squares Error

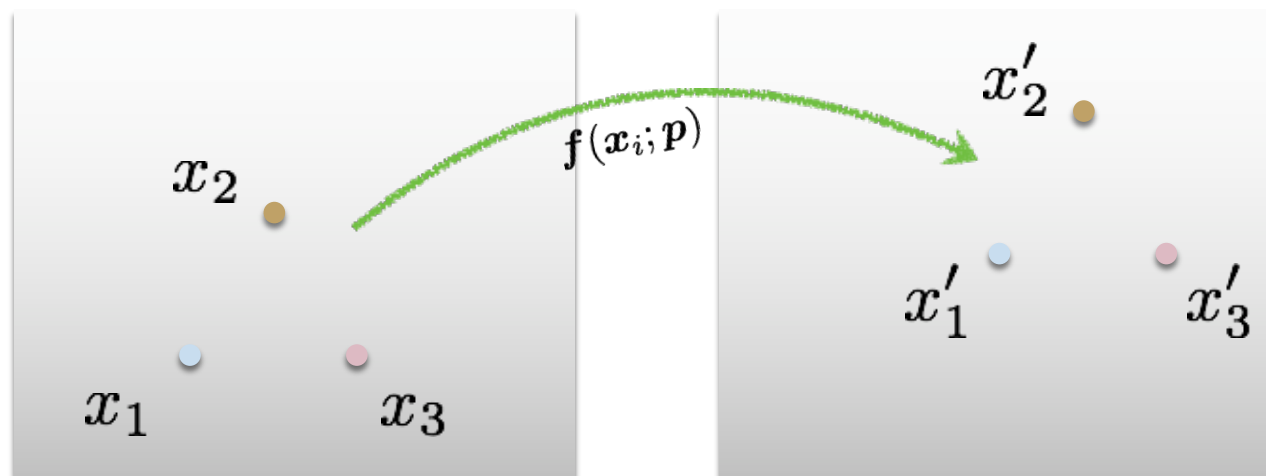
$$E_{\text{LS}} = \sum_i \left\| \mathbf{f}(x_i; \mathbf{p}) - x'_i \right\|^2$$

Euclidean  
(L2) norm

squared!

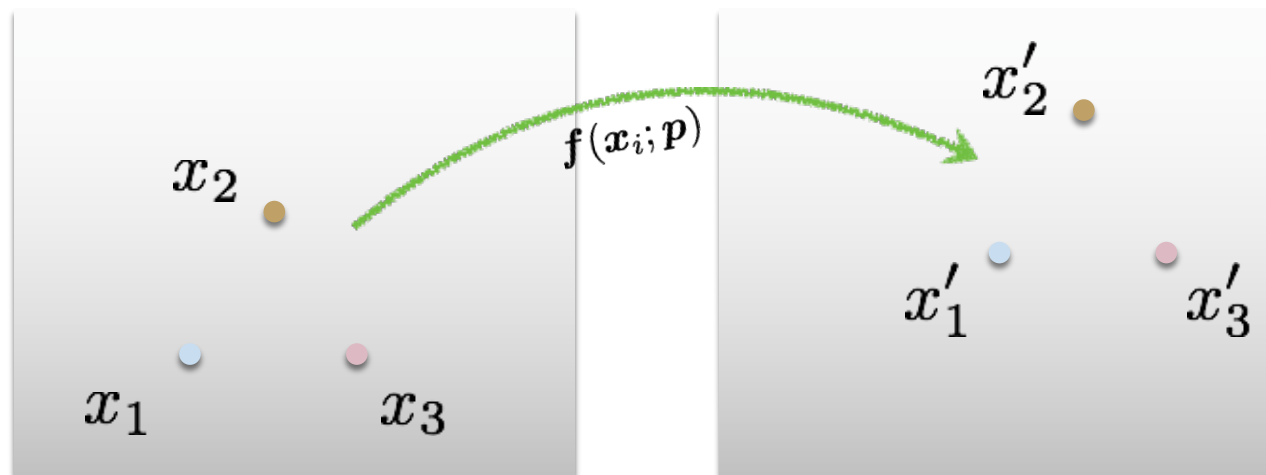
predicted  
location

measured  
location



## Least Squares Error

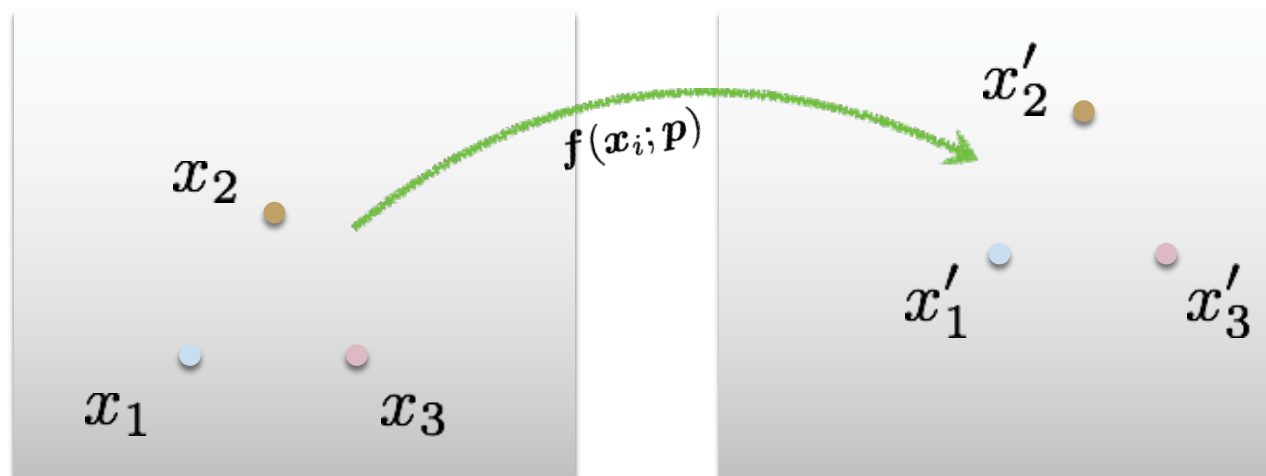
$$E_{\text{LS}} = \sum_i \underbrace{\| \mathbf{f}(\mathbf{x}_i; \mathbf{p}) - \mathbf{x}'_i \|^2}_{\text{Residual (projection error)}}$$



## Least Squares Error

$$E_{\text{LS}} = \sum_i \|\mathbf{f}(\mathbf{x}_i; \mathbf{p}) - \mathbf{x}'_i\|^2$$

*What do we want to optimize?*



Find parameters that minimize squared error

$$\hat{\mathbf{p}} = \arg \min_{\mathbf{p}} \sum_i \|\mathbf{f}(\mathbf{x}_i; \mathbf{p}) - \mathbf{x}'_i\|^2$$

General form of linear least squares

(**Warning:** change of notation.  $\mathbf{x}$  is a vector of parameters!)

$$\begin{aligned} E_{\text{LLS}} &= \sum_i |\mathbf{a}_i \mathbf{x} - \mathbf{b}_i|^2 \\ &= \|\mathbf{A} \mathbf{x} - \mathbf{b}\|^2 \quad (\text{matrix form}) \end{aligned}$$

# Determining unknown transformations

Affine transformation:

$$\begin{bmatrix} x' \\ y' \end{bmatrix} = \begin{bmatrix} p_1 & p_2 & p_3 \\ p_4 & p_5 & p_6 \end{bmatrix} \begin{bmatrix} x \\ y \\ 1 \end{bmatrix}$$

Why can we drop  
the last line?

Vectorize transformation  
parameters:

$$\begin{bmatrix} x' \\ y' \\ x' \\ y' \\ \vdots \\ x' \\ y' \end{bmatrix} = \begin{bmatrix} x & y & 1 & 0 & 0 & 0 \\ 0 & 0 & 0 & x & y & 1 \\ x & y & 1 & 0 & 0 & 0 \\ 0 & 0 & 0 & x & y & 1 \\ \vdots & & & \vdots & & \\ x & y & 1 & 0 & 0 & 0 \\ 0 & 0 & 0 & x & y & 1 \end{bmatrix} \begin{bmatrix} p_1 \\ p_2 \\ p_3 \\ p_4 \\ p_5 \\ p_6 \end{bmatrix}$$

Stack equations from point  
correspondences:

$$\begin{bmatrix} x' \\ y' \end{bmatrix} = \begin{bmatrix} x & y & 1 & 0 & 0 & 0 \\ 0 & 0 & 0 & x & y & 1 \end{bmatrix} \begin{bmatrix} p_1 \\ p_2 \\ p_3 \\ p_4 \\ p_5 \\ p_6 \end{bmatrix}$$



Notation in system form:

***b***

***A***

***x***

General form of linear least squares

(**Warning:** change of notation.  $\mathbf{x}$  is a vector of parameters!)

$$\begin{aligned} E_{\text{LLS}} &= \sum_i |\mathbf{a}_i \mathbf{x} - \mathbf{b}_i|^2 \\ &= \|\mathbf{A} \mathbf{x} - \mathbf{b}\|^2 \quad (\text{matrix form}) \end{aligned}$$

This function is quadratic.

*How do you find the root of a quadratic?*

# Solving the linear system

Convert the system to a linear least-squares problem:

$$E_{LLS} = \|\mathbf{A}\mathbf{x} - \mathbf{b}\|^2$$

Expand the error:

$$E_{LLS} = \mathbf{x}^\top (\mathbf{A}^\top \mathbf{A}) \mathbf{x} - 2\mathbf{x}^\top (\mathbf{A}^\top \mathbf{b}) + \|\mathbf{b}\|^2$$

Minimize the error:

Set derivative to 0  $(\mathbf{A}^\top \mathbf{A})\mathbf{x} = \mathbf{A}^\top \mathbf{b}$

Solve for x  $\mathbf{x} = (\mathbf{A}^\top \mathbf{A})^{-1} \mathbf{A}^\top \mathbf{b}$  ←

In Python:

```
x = numpy.linalg.  
solve(A, b)
```

Note: You almost never want to compute the inverse of a matrix.



**Linear** least squares estimation only works when the transform function is ?

**Linear** least squares estimation only works when the transform function is **linear! (duh)**

Also doesn't deal well with outliers